

Grade 1 Multiplication and Division Word Problems

Name: _____ Class: _____

Complete all the problems. Make sure to draw pictures to help you solve the problems.

Question 1

25 children are put into equal groups. There are 5 children in each group.
How many equal groups are there?



Total no of groups= 5

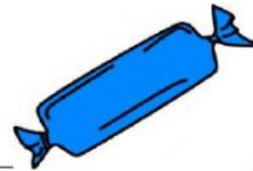
Total no of children in each group=5

$$5 \times 5 = 25$$

25

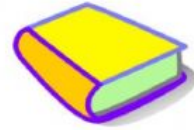
Question 2

5 boys share 35 candies equally.
How many candies does each boy get?



Question 3

Mandy put 9 books in 3 equal groups.
How many books did she put in each group?



Question 4

Anthony delivers 5 milk boxes 4 times a week. How many milk boxes did he deliver in a week?

Question 5

Jenny bought 8 t-shirts. Each t-shirt cost 5 dollars.
How much money did she spend?

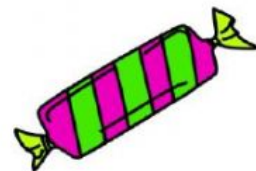


Question 6

There are 20 bikes in the parking lot. If they are divided into 4 groups, how many bikes are there in each group?

Question 7

5 girls share 40 candies equally.
How many candies will each girl get?




Question 8

Edward had 5 boxes of pens. Each box had 2 pens in it. How many pens did Edward have in total?

Question 9

Mandy brings has 3 boxes and each box has 4 Coca-Cola?
How many Coca-cola are there altogether?



Question 10

There are 10 fish in each fish tank. How many fish are there in 7 fish tanks?

Question 11

Yesterday I was hungry and bought 3 hamburgers.
The price of 1 hamburger was 5 dollars.
How much money did I spend?



Question 12

There are 6 eggs on each plate. How many eggs are there on 5 plates?