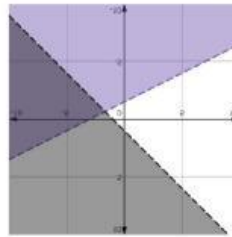
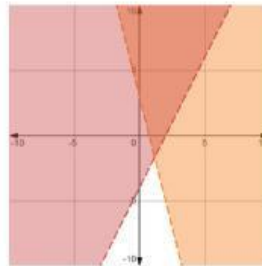


1) Resolver los siguientes sistemas y luego unir con el gráfico correspondiente.

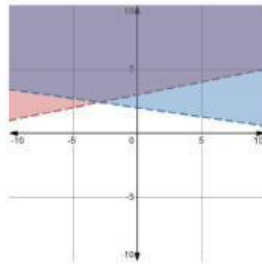
a) 
$$\begin{cases} 4x + y \geq 3 \\ 2x - y < 4 \end{cases}$$



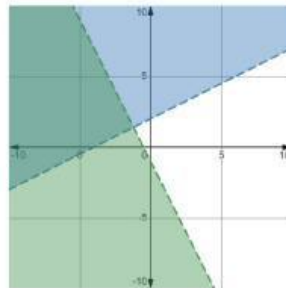
b) 
$$\begin{cases} -x + 2y > 4 \\ 4x + 2y < -2 \end{cases}$$



c) 
$$\begin{cases} 5x + 3y \leq 8 \\ x + y < -7 \end{cases}$$



d) 
$$\begin{cases} -3x - 6y \geq 9 \\ 4x - 4y \leq -4 \end{cases}$$



e) 
$$\begin{cases} -x + 5y \geq 15 \\ x + 7y > 14 \end{cases}$$

