

MULTIPLICATION

Using Sets/Groups

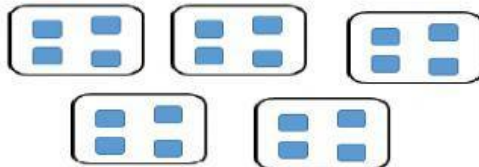
Complete the sentences.

1.



There are ____ equal groups with ____ in each group.

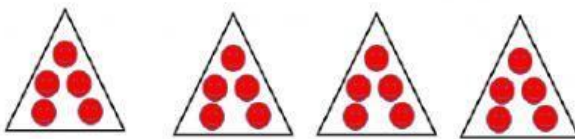
2.



There are ____ equal groups with ____ in each group.

I have ____ x ____ = ____

3.





Describe the equal groups.

4. Are the groups EQUAL or UNEQUAL? Explain why or why not.



5. Ben started to draw EQUAL groups of strawberries. Drag the strawberries to finish the drawing.



b) Finish the sentence. Ben has ____ equal groups with ____ in each group.

c) Write a repeated addition and a multiplication sentence to represent the picture.

repeated addition

number sentence

