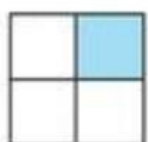



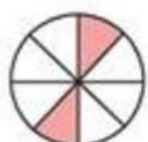

Nombre y Apellido: _____

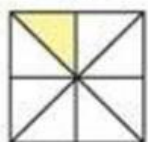
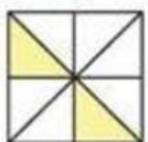
Sumas de Fracciones con Gráficos



¡Comparamos!

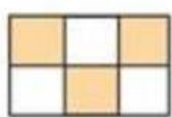
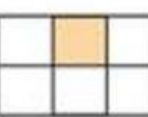
1. Realiza las siguientes sumas de fracciones, escribiendo el resultado de cada una de las operaciones. (8 pts.)


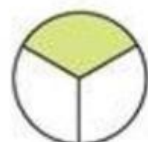

 $\frac{1}{4} +$

 $\frac{2}{4} =$




 $\frac{2}{8} +$

 $\frac{3}{8} =$



 $\frac{1}{8} +$

 $\frac{2}{8} =$


 $\frac{1}{4} +$

 $\frac{1}{4} =$


 $\frac{3}{6} +$

 $\frac{1}{6} =$


 $\frac{1}{3} +$

 $\frac{1}{3} =$


 $\frac{1}{4} +$

 $\frac{2}{4} =$





































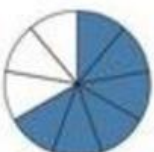











 $\frac{2}{6} +$

 $\frac{3}{6} =$

Nombre y Apellido: _____

¡Completamos!

2. Completa los siguientes gráficos (12 pts.)

1.  =   = 	7.  =   = 
2.  =   = 	8.  =   = 
3.  =   = 	9.  =   = 
4.  =   = 	10.  =   = 
5.  =   = 	11.  =   = 
6.  =   = 	12.  =   = 