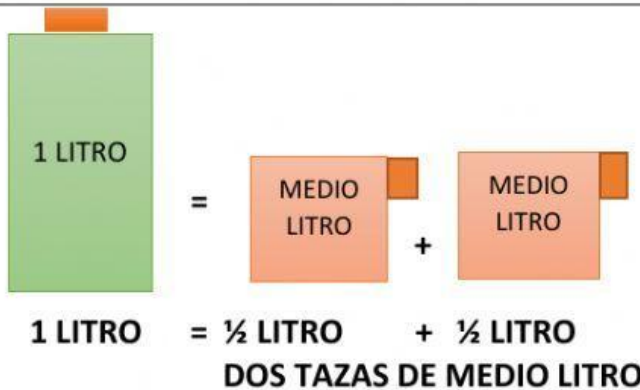
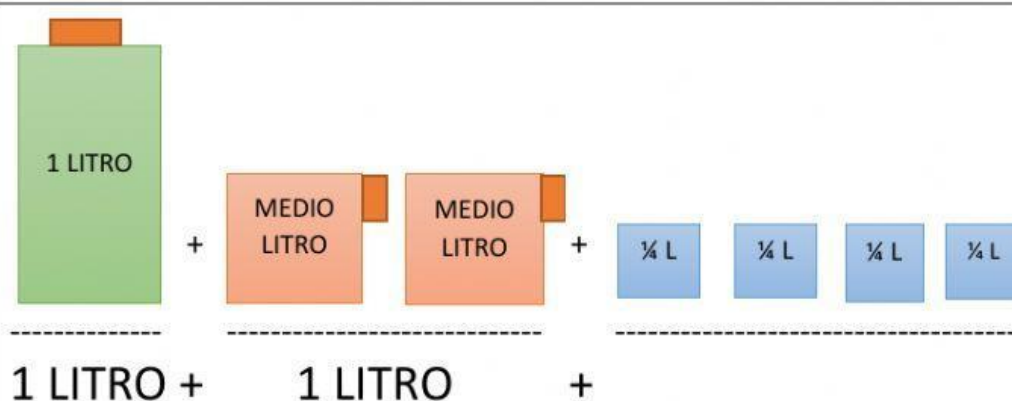
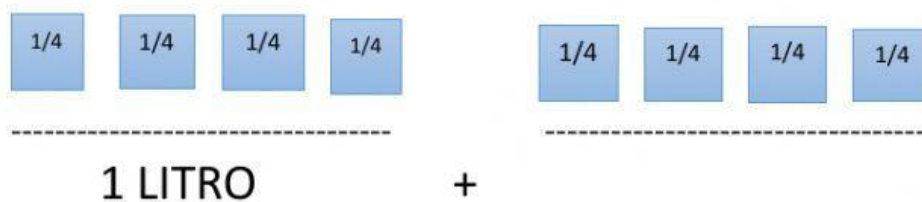
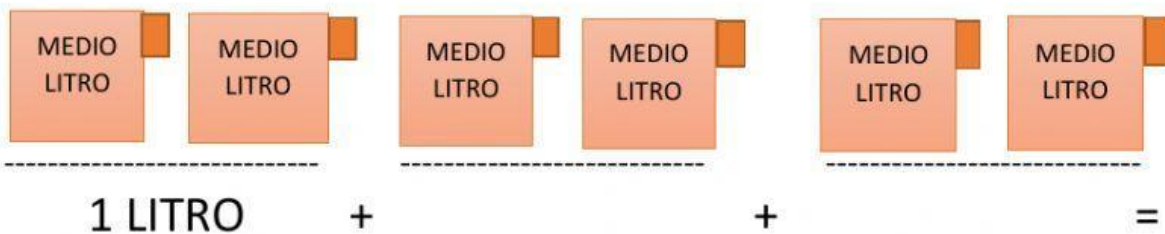


TEMA 6 – MATEMÁTICAS

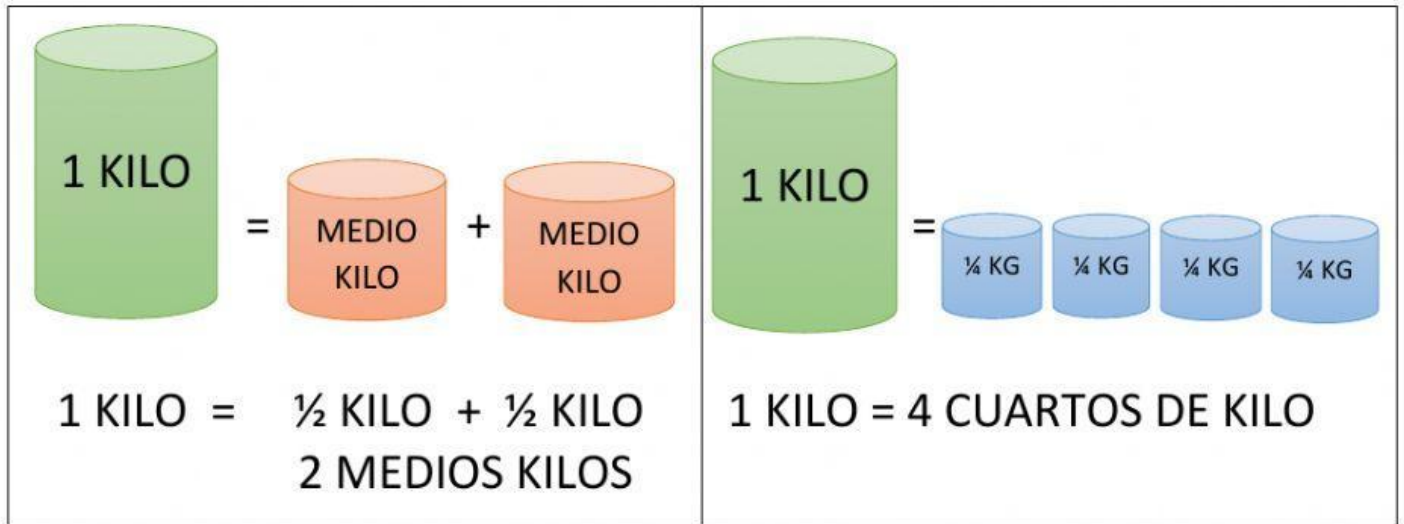
*EL LITRO



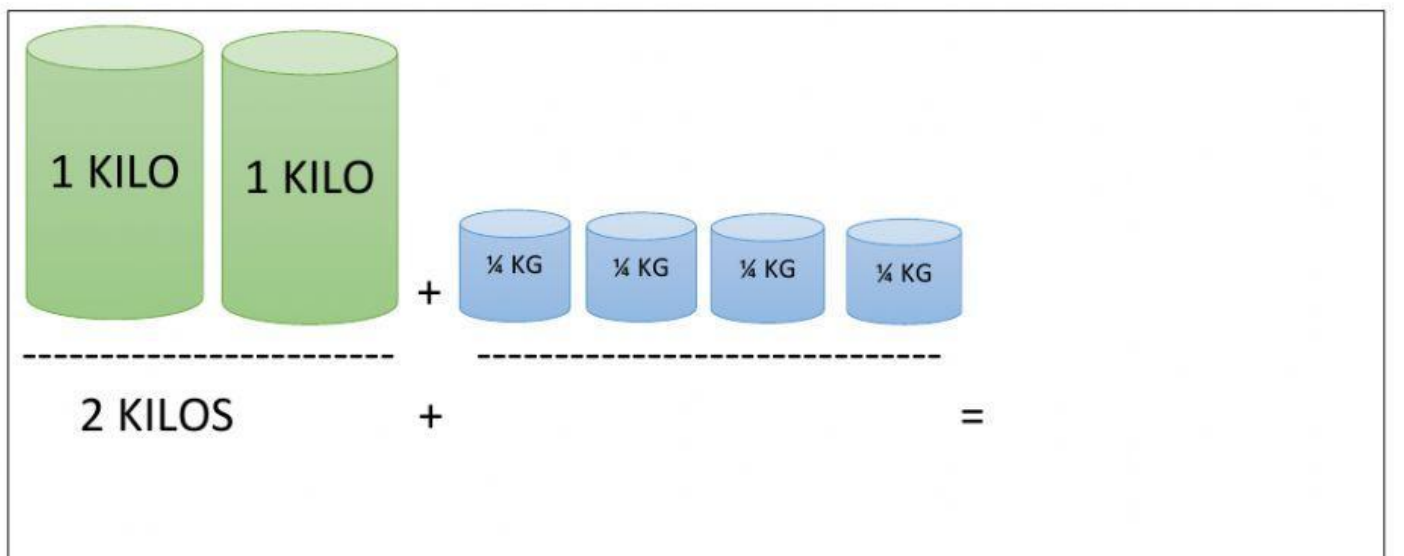
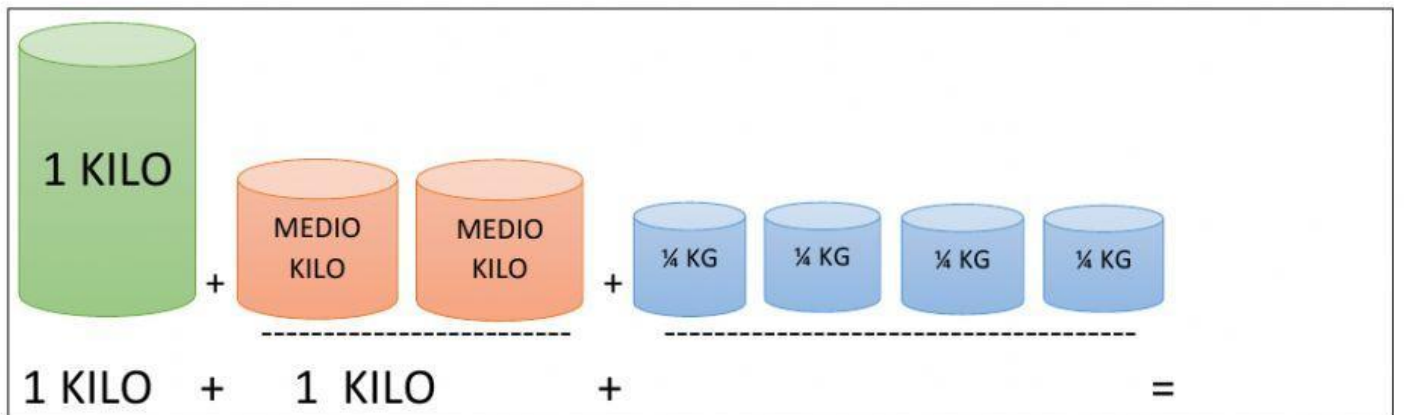
1-¿CUÁNTOS LITROS HAY EN TOTAL?



*KILOS



2- ¿CUÁNTOS KILOS HAY EN TOTAL?



SUMAS Y RESTAS LLEVANDO (3 CIFRAS)

| | | | | | |
|---|--------------|--------------|--------------|----|----|
| | | 8 | 13 | 14 | 13 |
| | 9 | 4 | 3 | | |
| - | 3 | 8 | 9 | | |
| | 5 | 5 | 4 | | |

| | | | | | |
|---|---|---|---|--|--|
| | | | | | |
| | 5 | 4 | 2 | | |
| - | 4 | 8 | 9 | | |
| | | | | | |

| | | | | | |
|---|---|---|---|--|--|
| | | | | | |
| | 4 | 7 | 1 | | |
| - | 3 | 4 | 5 | | |
| | | | | | |

| | | | | | |
|---|---|---|---|--|--|
| | | | | | |
| | 9 | 4 | 5 | | |
| + | 2 | 3 | 7 | | |
| | | | | | |

En el comedor tienen 470 manzanas. Los alumnos del colegio han comido 341. ¿Cuántas manzanas han sobrado?

| | | | | | |
|--|---|---|---|--|--|
| | | | | | |
| | 4 | 7 | 0 | | |
| | | | | | |
| | | | | | |

manzanas

