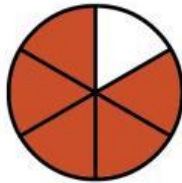
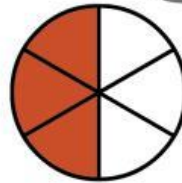


## Fractions

- Write the fractions of the sliced circles next to them.



$$\frac{5}{6}$$


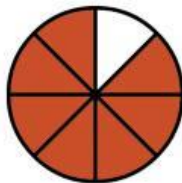
—



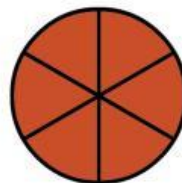
—



—



—



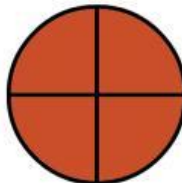
—



—



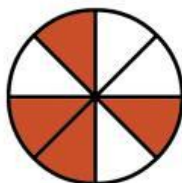
—



—



—



—



—