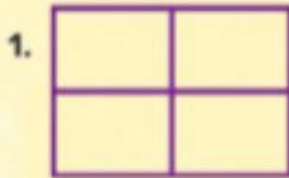
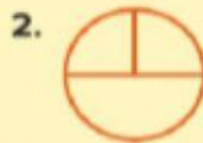


# Am I Ready?

Write the number of parts. Tell whether each figure shows parts that are *equal* or *not equal*.



\_\_\_\_\_



\_\_\_\_\_




\_\_\_\_\_

Write the name of the equal parts. Write *halves*, *thirds*, or *fourths*.



\_\_\_\_\_



\_\_\_\_\_

