





MATTER AND HEAT

1. Look at the photos and write solid, liquid or gas.

 <input type="text"/>	 <input type="text"/>	 <input type="text"/>
 <input type="text"/>	 <input type="text"/>	 <input type="text"/>

2. Complete the sentences with the words in the box.

SOLID – LIQUID – GAS

- _____ have a definite volume and a definite shape.
- _____ have a definite volume but not a definite shape.
- _____ do not have a definite volume or a definite shape.

3. Are the physical changes reversible (R) or irreversible (I)?

<input type="checkbox"/> 	<input type="checkbox"/> 	<input type="checkbox"/> 	<input type="checkbox"/> 
folded paper	broken glass	melting ice	burnt paper

4. Read the sentences and write true or false.

- Matter makes up everything around us _____
- We can use beaker and cylinder to measure volume _____
- Matter can change shape and state _____
- Matter has four states _____