
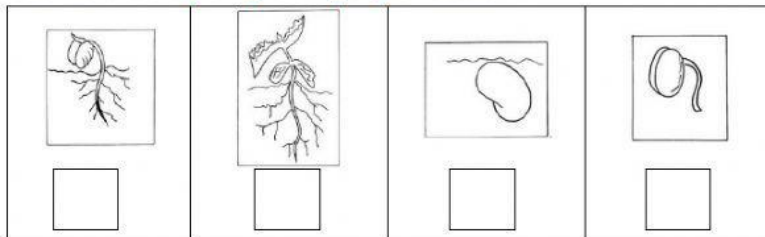


SCIENCE WORKSHEET_PLANTS

1. Argya has a flower. He wants to grow the flower. What should he give to the flower to grow well? Tick three things.




2. Observe the step of growing a plant below.-



- a) Order the growing of a plant by writing number 1 – 4.
- b) Which part of the plant grows first? Ring.
- leaf fruit root
- c) Which part of the plant grows next? Ring.
- leaf flower seed
3. Ditya and Dhika grow some plants in some pots. Ditya and Dhika put some soil in the pots.
- Dhika doesn't water the plants every day and puts it inside the box.
- Ditya waters his plants every day and puts it next to the window.
- Choose 'YES' if the plant gets each thing below. Choose 'NO' if it doesn't get it.

What the plants get	Dhika's plant	Ditya's plant
soil		
water		
sunlight		

After a week, the two plants are shown in the picture below.



- a) Which plant belongs to Dhika? Plant ____ belongs to Dhika.
- b) Which plant belongs to Ditya? Plant ____ belongs to Ditya.