

Academic Session: 2023-24
First Term Mathematics Examination

Q1: Count and choose the correct answer:

1) How many cars?



- a) 5 b) 8 c) 6

2) How many apples?



- a) 4 b) 7 c) 3

3) How many pencils?



- a) 9 b) 5 c) 6

4) How many cats?



- a) 4 b) 5 c) 2

5) How many stars?



- a) 8 b) 2 c) 6

6) How many footballs?




a) 3

b) 2

c) 4

7) How many ants?



a) 10

b) 9

c) 7

8) How many umbrellas?



a) 10

b) 8

c) 7

9) How many rabbits?




a) 1

b) 7

c) 5

10) How many tomatoes?



a) 7

b) 9

c) 5

Q2: What is the missing number:

1)



a) 8

b) 10

c) 4

2)



a) 4

b) 3

c) 6

Q3: Select the same shape:


1)



a)



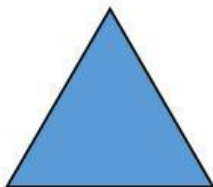
b)



c)



2)



a)



b)



c)

