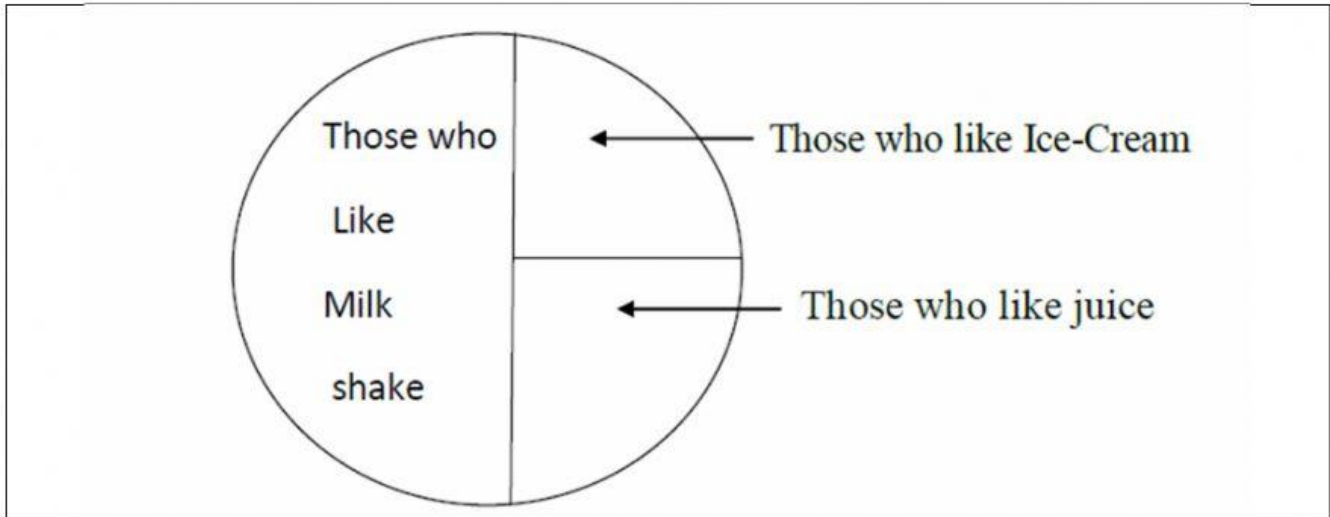


Class 4 Math  
Smart Chart

Name \_\_\_\_\_

Roll No. \_\_\_\_\_

1) See the Chapati chart answer the questions.



a) How many children like Ice cream?

(i) One – third

(ii) One – fourth

(iii) Three- fourth

b) How many like Milk Shake?

i) One – third

(ii) Half

(iii) One fourth

c) Which items are liked by equal number?

(i) Milk shake and Juice

(ii) Milk shake and Ice cream

(iii) Ice- cream and Juice

d) If total numbers of children are 600 then tell the number of


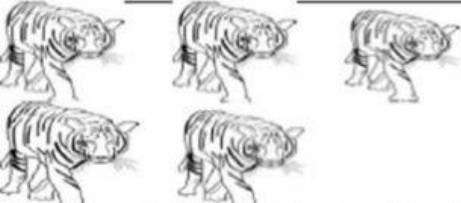


children like:

(i)Ice – cream

(ii) Milk shake

(iii) Juice

2) Ajay made a record of his favourite animals he saw in the zoo. Write the number and answer the following questions.

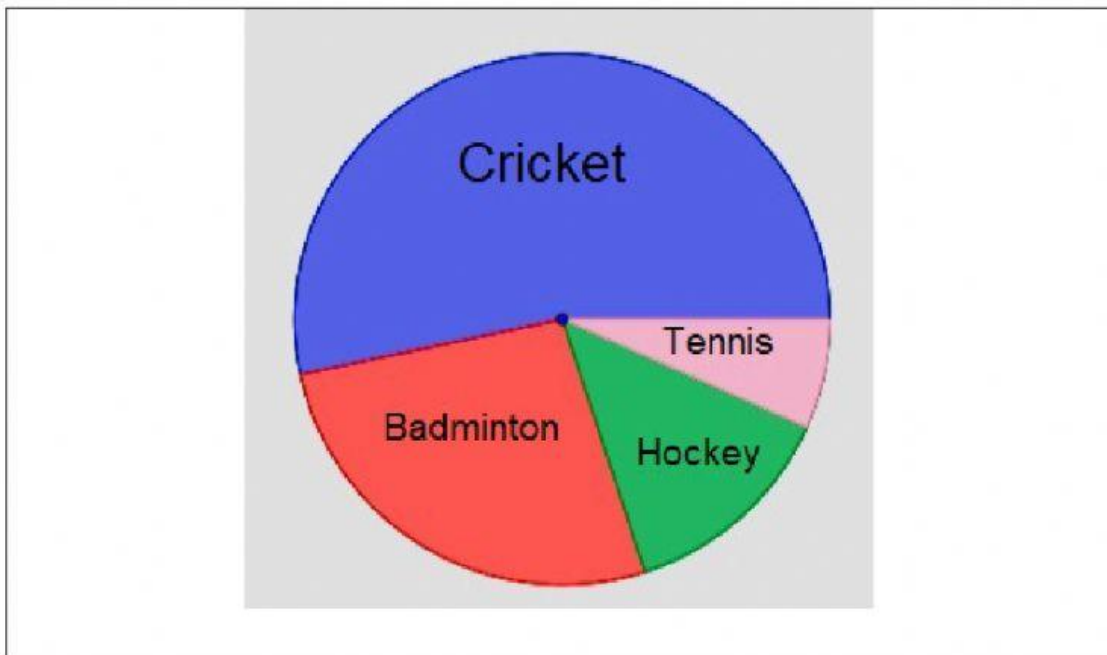
Animals	Numbers
 <span data-bbox="622 369 774 414">Elephant</span>	
 <span data-bbox="630 604 734 660">Tiger</span>	
 <span data-bbox="774 828 877 884">Deer</span>	
 <span data-bbox="813 1075 957 1131">Monkey</span>	

a. How many animals did Ajay see altogether?

b. Which animal is least in number?

c. Which animal is maximum in number?

3) Look at the chapatti chart/ pie chart showing different sports liked by people-



(a) Which is the most popular sport?

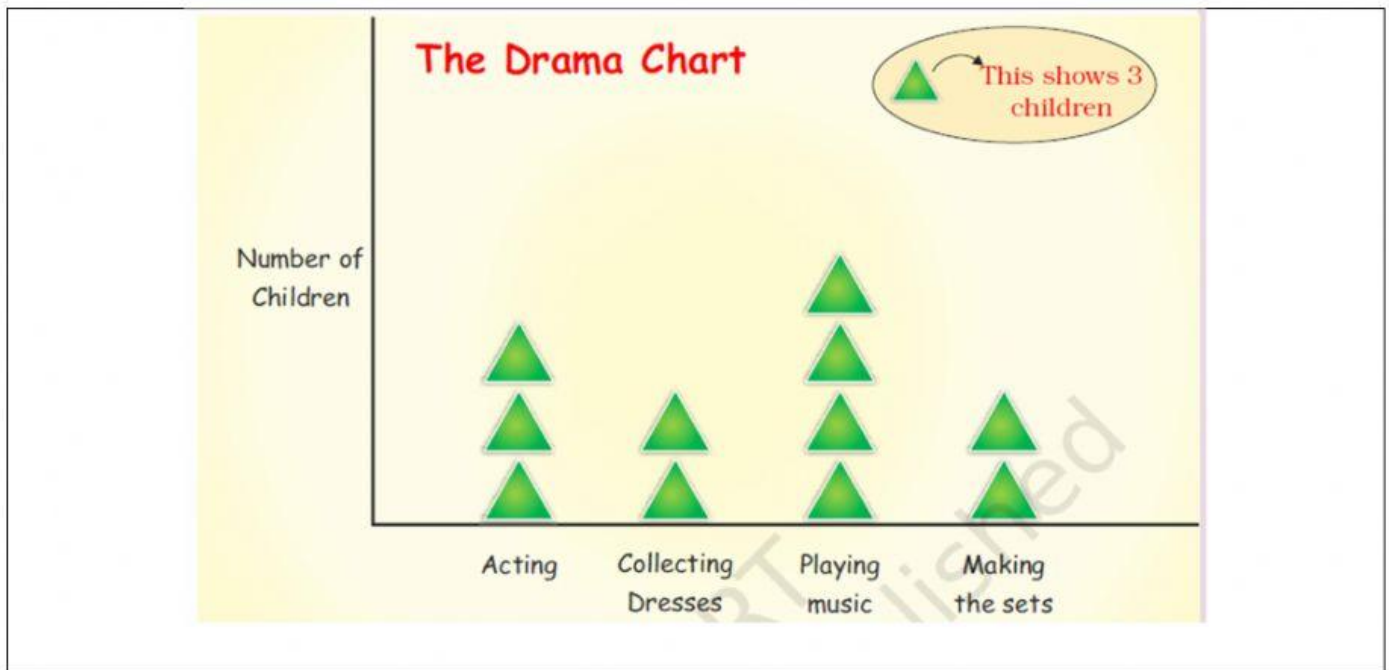
(b) Which is the least popular sport?

(c) Which is more-

No. of people who like hockey

No. of people who like badminton

4) All children of a class are getting ready for a drama. Some children are acting. Some are busy collecting the dresses. Some are bringing tables and chairs to make the sets.



- How many children are acting in the drama?
- Which are more—children making the sets or those acting?
- What is being done by most of the children?
- How many children are collecting dresses?

Prepared by  
Abhishek PRT  
KV Mancherial