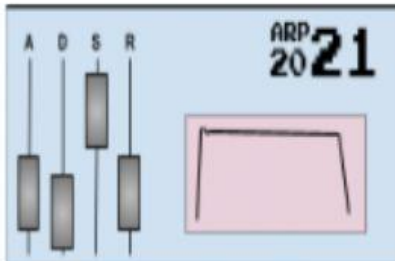


Question 4.2

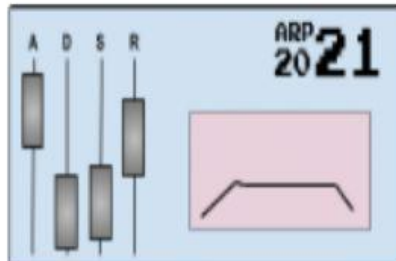
You will hear two versions of a recording of a synthesizer. The first version is the preset setting. The second version has had an ADSR change applied.

- Identify which ADSR change shown below (1, 2 or 3) has been applied, and justify your answer.

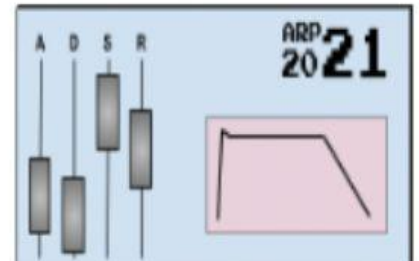
1:



2:



3:



ADSR change applied (1, 2 or 3):

a) Justification

- Listen to another excerpt. A filter has been applied to the vocal recording. Name the process that has also been applied to the vocals.

b) Process

- Listen to the excerpt again. Identify **two** controls on a can change on a filter processor.

c) Control 1

Control 2
