
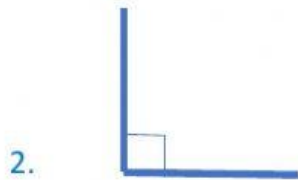
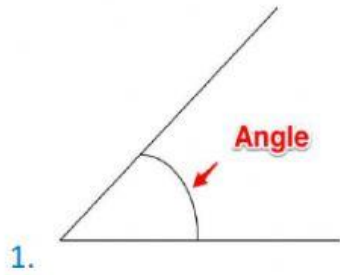


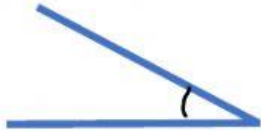
## Comparing Angles

Directions: Look at the angles below and determine if they are

$=$ ,  $>$ , or  $<$  to a right angle.



5.



6.




7.



8.



9.



10.

