






Ques Aditya decided to conduct a study on most popular car color. So he stood outside his house and recorded the observation about 50 cars passed from there. This was what he observed.

Car Color	Number of cars
Red Car 	16
Green Car 	12
Blue Car 	5
Black Car 	4
Orange Car 	13

Q1. How many cars did Aditya count?

Q2. How many blue cars did Aditya count?

Q3. How many green cars did Aditya count?

Q4. What is the most popular color car according to his observation?

Q5. What is the least popular color car according to his observation?