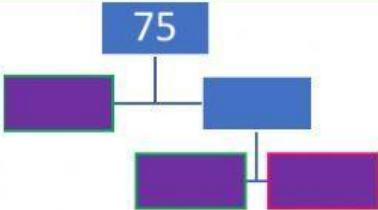
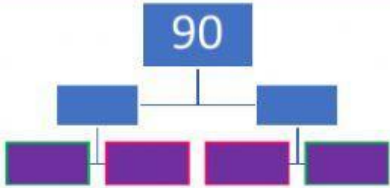


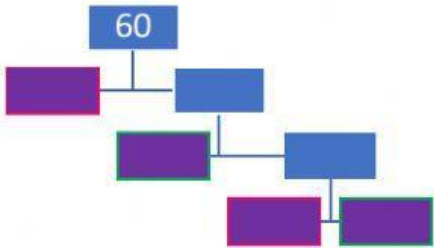
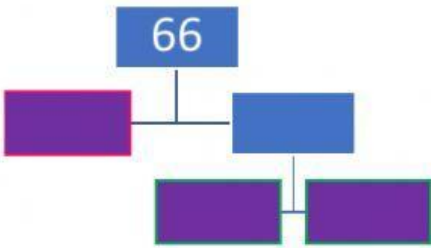
# GCF & LCM Graded Worksheet

Find the **GCF and LCM** by using the **LISTING METHOD**. Show your work. (8 points)

32 and 20	18 and 81
32:	18:
20:	81:
GCF:	GCF:
32:	18:
20:	81:
LCM:	LCM:

Find the **GCF and LCM** by using the **PRIME FACTORIZATION METHOD** (Factor Trees). Show your work. (12 points)

75 and 90	
	
GCF =	
LCM =	

60 and 66	
	
GCF =	
LCM =	