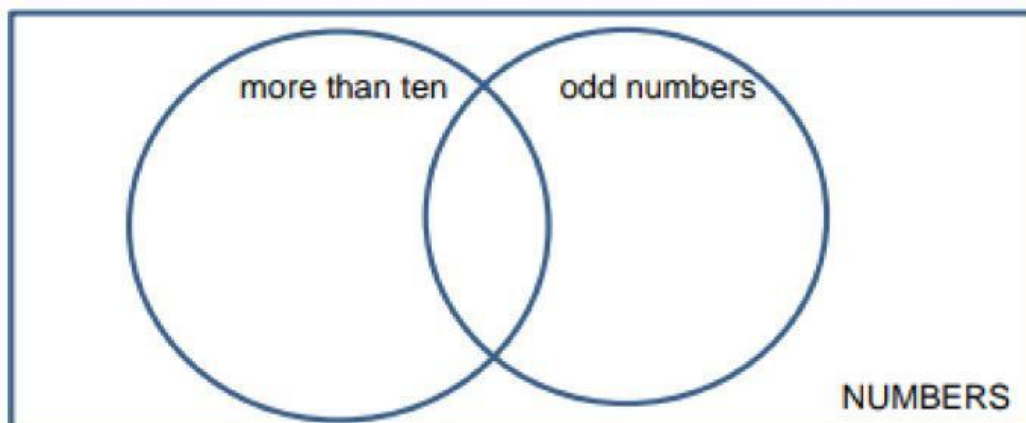
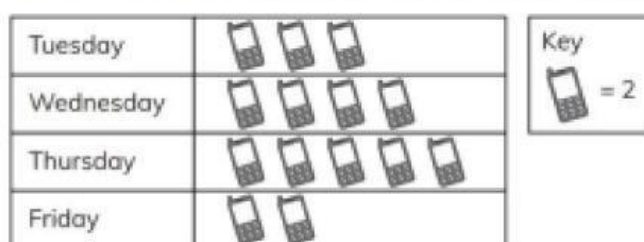


I. Sort these numbers into the Venn diagram.

14 5 56 82 61 7 41 9 45 68 72 3



II. Look at this pictogram from a phone shop.

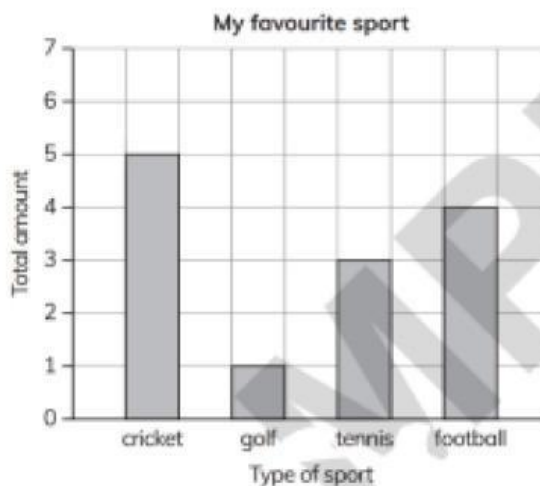


- How many phones were sold on Friday? _____.
- How many phones were sold on Wednesday? _____.
- How many phones were sold all together? _____.
- On which day were the most number of phones sold? _____.
- On which day were the least number of phones sold? _____.

III. Correct the data on the bar chart.

- Six people like cricket.
- Three people like golf.
- Five people like tennis.
- Seven people like football.

- How many people were asked all together? _____.
- Which sport is liked the most?
_____.
- Which sport is liked the least?
_____.
- Write the sports in order, starting with the least liked.
_____.



IV. How many kids voted for roller skating?

