

Name: \_\_\_\_\_

Surname: \_\_\_\_\_

Class: \_\_\_\_\_

# WHAT'S THE TIME?



TO

PAST

... O'CLOCK

FIVE TO...

FIVE PAST...

TEN TO...

TEN PAST...

a QUARTER TO...

a QUARTER PAST...

TWENTY TO...

TWENTY PAST...

TWENTY-FIVE TO...

TWENTY-FIVE PAST...

HALF PAST...

15 minutes = a quarter  
30 minutes = half

REMEMBER!

a.m.- in the morning

p.m.- in the afternoon, in the evening

6.00 - It's six o'clock

6.35 - It's twenty-five to seven

6.05 - It's five past six

6.40 - It's twenty to seven

6.10 - It's ten past six

6.45 - It's a quarter to seven

6.15 - It's a quarter past six

6.50 - It's ten to seven

6.20 - It's twenty past six

6.55 - It's five to seven

6.25 - It's twenty-five past six

7.00 - It's seven o'clock

6.30 - It's half past six

It's your turn now.  
What's the time?



It's \_\_\_\_\_



It's \_\_\_\_\_



It's \_\_\_\_\_



It's \_\_\_\_\_



It's \_\_\_\_\_



It's \_\_\_\_\_



It's \_\_\_\_\_



It's \_\_\_\_\_



It's \_\_\_\_\_



It's \_\_\_\_\_



It's \_\_\_\_\_



It's \_\_\_\_\_

It's half past ten.


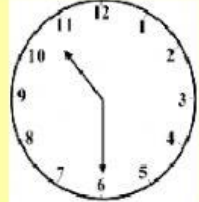

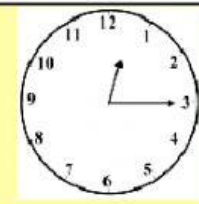


It's quarter past ten.

It's seven o'clock.

It's quarter to four.

It's quarter past twelve.

It's half past two.

# WHAT TIME IS IT?



:00

(HOUR)  
o'clock



:30

half past  
(HOUR)



:15

a quarter past  
(HOUR)



:45

a quarter to  
(NEXT HOUR)

2:45 It's a quarter to three. \_\_\_\_\_

7:00 It's \_\_\_\_\_

6:00 It's six o'clock. \_\_\_\_\_

9:15 It's \_\_\_\_\_

8:15 It's \_\_\_\_\_

3:30 It's \_\_\_\_\_

9:30 It's \_\_\_\_\_

11:45 It's \_\_\_\_\_

12:00 It's \_\_\_\_\_

4:15 It's \_\_\_\_\_

1:30 It's \_\_\_\_\_

2:00 It's \_\_\_\_\_

LISTEN, DRAG EACH PICTURE TO THE CORRECT BOX AND WRITE THE TIME.



1

It's \_\_\_\_\_

2

It's \_\_\_\_\_

3

It's \_\_\_\_\_

4

It's \_\_\_\_\_

5

It's \_\_\_\_\_

6

It's \_\_\_\_\_