

Name _____ Date _____ Class _____

LESSON
7-6

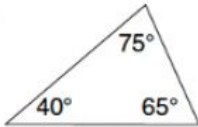
Practice A

Congruence


Match each polygon in column A with a congruent polygon in column B.

Column A

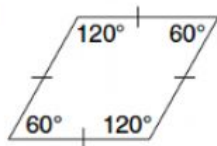
1.



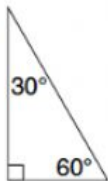
2.



3.

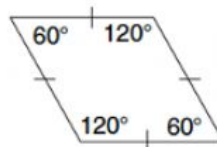


4.

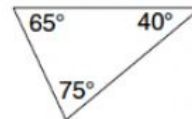


Column B

A.



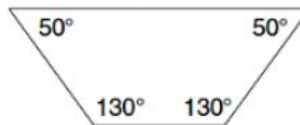
B.



C.



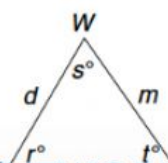
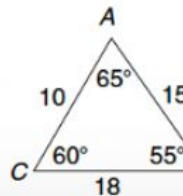
D.



Triangle ABC is congruent to triangle WXY .

5. Find d . _____

6. Find t . _____



Maps