




# Maths Department

## Pre-test Practice Easy 2

Featuring shapes and their properties, and vocabulary to do with geometry.



Name: \_\_\_\_\_

Question 1

What is the name of this shape?



parallelogram

rhombus

rectangle

Kite

trapezium

Question 2

This shape has four equal length sides. What is it?



parallelogram

rhombus


rectangle

Kite

trapezium

Question 3

What is the name of this quadrilateral?



parallelogram

rhombus


rectangle

Kite

trapezium

Question 4

What is the name of this shape?



triangle

quadrilateral

pentagon

hexagon

octagon

Question 5

What is the name of this shape?



parallelogram

rhombus


rectangle

Kite

trapezium

Question 6

What is the name of this shape?



parallelogram

rhombus

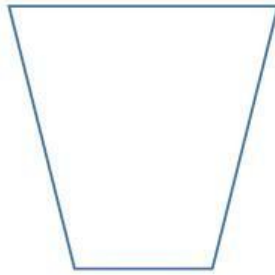
rectangle

Kite

trapezium

Question 7

What is the name of this shape?



parallelogram

rhombus


rectangle

Kite

trapezium

Question 8

Name the shape!



parallelogram

rhombus


rectangle

Kite

trapezium

Question 9

This shape has four equal length sides. Name it!



parallelogram

rhombus


rectangle

Kite

trapezium

Question 10

This shape has four equal sides and all angles are  $90^\circ$ .



parallelogram

rhombus

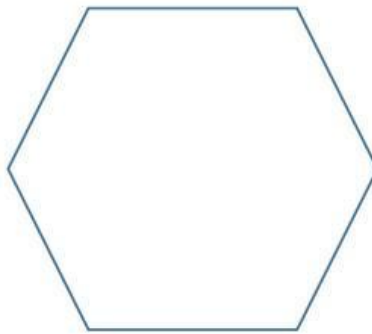
rectangle

square

trapezium

Question 11

Name the shape!



pentagon

hexagon

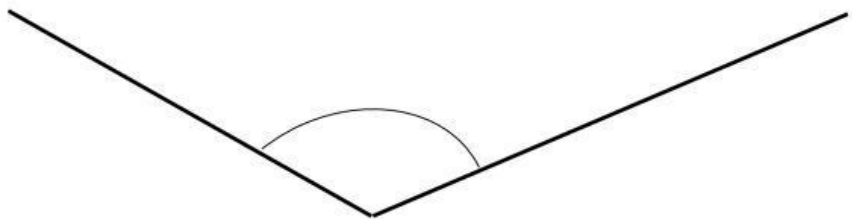
heptagon

octagon

decagon

Question 12

What is the best word to describe this angle?



acute

obtuse

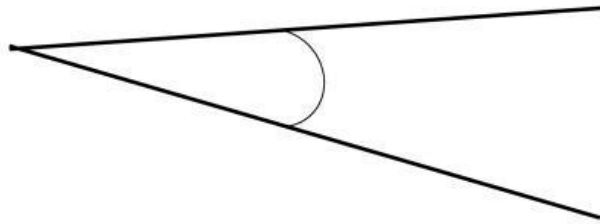
right angle

straight angle

reflex angle

Question 13

What is the best phrase to describe this angle?



acute angle

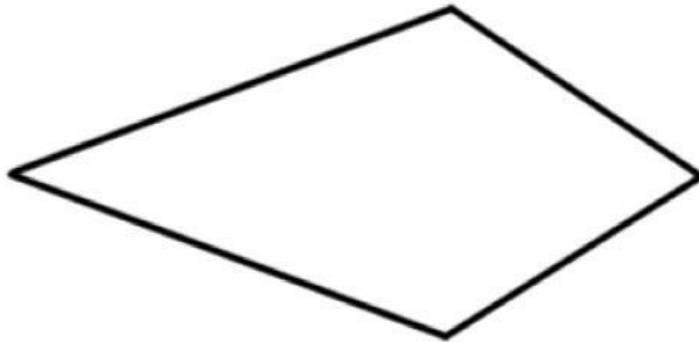
obtuse angle

reflex angle

straight angle

right angle

Question 14



Name the shape!

parallelogram

rhombus

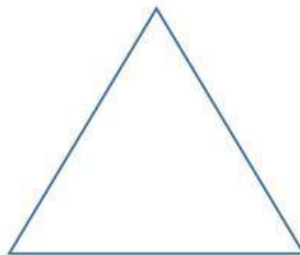
rectangle

Kite

trapezium

Question 15

All three sides are equal length.  
What is the exact name of the shape?



Scalene triangle


Isosceles triangle

Equilateral  
triangle

Right angle  
triangle

Question 16

The two long sides are the same length. What is the exact name of this shape?




Scalene triangle

Isosceles triangle

Equilateral triangle

Right angle triangle



Question 17

What is the name of this shape?



parallelogram

rhombus

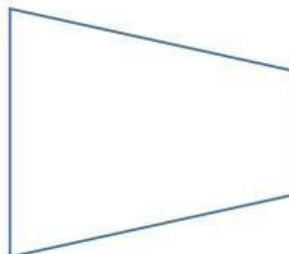
rectangle

Kite

trapezium

Question 18

What is the name of this shape?



parallelogram

rhombus

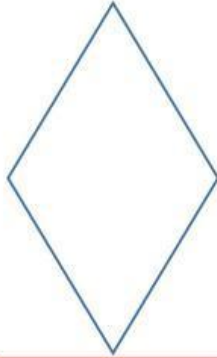
rectangle

Kite

trapezium

Question 19

What is the name of the shape?  
Its sides are all the same length.



parallelogram

rhombus

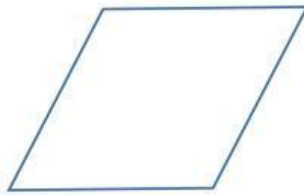
rectangle

Kite

trapezium

Question 20

What is the name of the shape?  
Its sides are all the same length.



parallelogram

rhombus

rectangle

Kite

trapezium