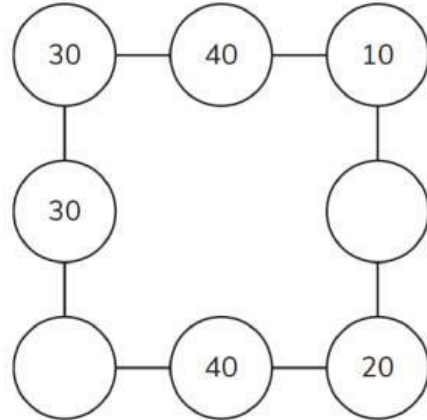


ACHIEVEMENT		COMMENT
<input type="checkbox"/> Excellent	<input type="checkbox"/> Fair	
<input type="checkbox"/> Good	<input type="checkbox"/> Need improvement	

**SHEET 2**

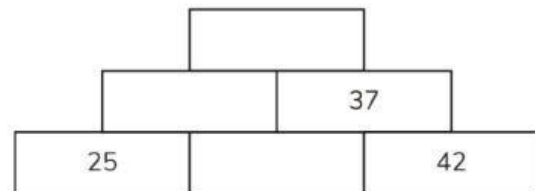
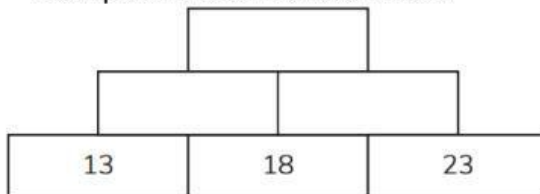
1. Here is a number square with two missing numbers. The numbers along each edge must add up to 80. Write the missing numbers.



2. Here are six digit cards. Use four of the cards to make this calculation correct.

+   = 40

3. The number in each brick is the sum of the numbers on the two bricks below it. Complete these number walls.



4. Circle three numbers that total 750.

**50      150      250      350      450**

5. Shade all the odd numbers. What is the hidden letter?

416	636	50	32	412	404	53	676	595	358
232	861	220	657	154	206	45	294	687	590
198	423	8	53	654	682	566	742	174	552
110	5	851	825	730					

6. The numbers in the circles are multiplied together to give the numbers in the squares between them. Fill in the missing numbers.

