

ACHIEVEMENT		COMMENT
<input type="checkbox"/> Excellent	<input type="checkbox"/> Fair	
<input type="checkbox"/> Good	<input type="checkbox"/> Need improvement	



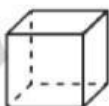

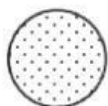
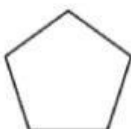
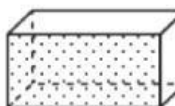
SHEET 12

1. This tally chart shows the number of bikes a shop sold in 4 weeks.

Bikes sold in a week	Tally
Week 1	
Week 2	
Week 3	
Week 4	



- How many bikes were sold in the 4th week?
 - How many bikes were sold in the 1st week?
 - How many bikes were sold altogether in the 2nd and 3rd weeks?
 - How many bikes were sold in the 4 weeks altogether?
2. Sort the shapes in the Carroll diagram using arrows. the first one has been done for you.

							
	2D shape		Not a 2D shape				
Spots							
No spots							