

ASSESSMENT UNIT 3

Changes

Subject	Science	Grade II (Primary 2)
---------	---------	----------------------

Total marks : 16

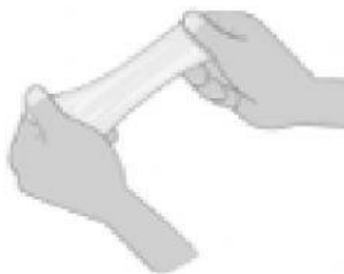
Bismillahirrahmanirrahim.

Answer all questions.


1. Jane has some modelling clay. She wants to change the shape of it.

What is Jane doing to the modelling clay in each picture?

(a)



(b)




(c)



(d)



2. This picture shows a snowman in the Sun.



Complete these sentences. Use the helping words.

liquid	freezing	gas
solid	melting	boiling

- (a) The snowman is _____ in the Sun.
- (b) The snow is changing from a _____ to a _____ as it gains heat from the Sun.

3. Classify these solids using the table below.

sand	sand	pepper
flour	sugar	chalk

Dissolve in water	Do not dissolve in water

4. What causes the change in materials in each following situations?
Choose the correct word from the text below.


melting	freezing	dissolving
---------	----------	------------

(a)




Water turning
into ice cubes

(b)



(c)



Alhamdulillahirabbil 'alamin