
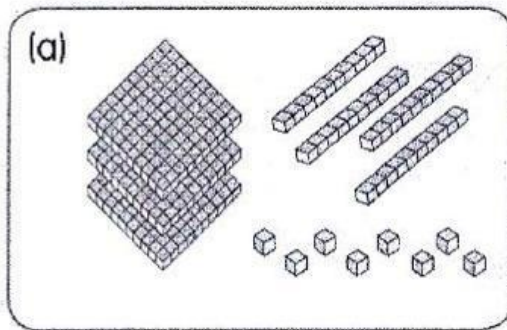
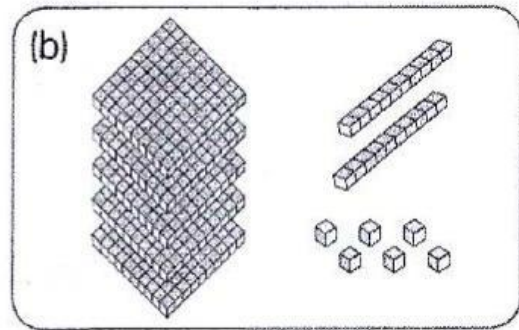


September test
Math test

Name: _____ Date: _____

- (1) How many  are there?
Write the numbers in the blanks.





- (2) Write the numbers in words.

(a) 301 _____

(b) 849 _____

(c) 762 _____

- (3) Write in numerals.

(a) six hundred and twenty-three _____

(b) four hundred and eighty _____

(c) nine hundred and two _____

(4) (a) What is three hundred and fifty-two in numerals? _____

(b) Is it an odd or even number? _____

(5) Fill in the blanks.

(a) In 713, the digit _____ is in the tens place.

(b) In 508, the value of the digit 5 is _____.

(c) $679 = 600 + \text{_____} + 9$

(6) Write the answers in the blanks.

(a) Which number is greater? _____

(215)

(270)

(b) Which number is the smallest? _____

(312)

(197)

(199)

(c) Arrange the numbers in order.
Begin with the smallest.

(509)

(905)

(590)

(950)

_____, _____, _____, _____
smallest

- (7) Find the missing numbers.

873	883		903	913		933	943	953	963
-----	-----	--	-----	-----	--	-----	-----	-----	-----

- (8) Fill in the blanks.

- (a) 1 less than 638 is _____.
- (b) _____ is 10 more than 890.
- (c) 100 more than 899 is _____.
- (d) _____ is 100 less than 746.

- (9) Complete the number patterns.

- (a) 830, 833, 836, 839, _____, _____, _____
- (b) 500, 600, 700, 800, _____, _____
- (c) 600, 500, 400, 300, _____, _____, _____
- (d) 144, _____, 136, 132, 128, 124, _____
- *(e) 4, 8, 6, 10, 8, 12, 10, 14, _____, _____, 14
- *(f) 10, 15, 14, 19, 18, 23, 22, _____, _____