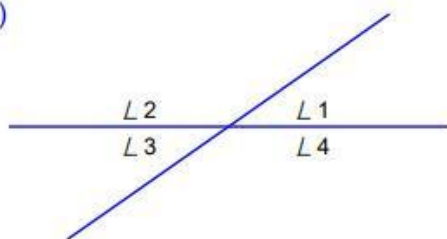


Для кожного випадка 1)-8) знайди величини невідомих кутів

1)



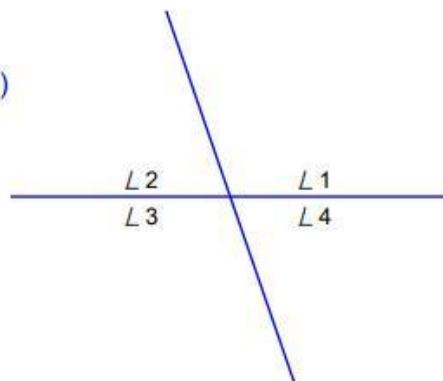
$$\angle 1 = \underline{35^\circ}$$

$$\angle 2 = \underline{\quad}$$

$$\angle 3 = \underline{\quad}$$

$$\angle 4 = \underline{145^\circ}$$

2)



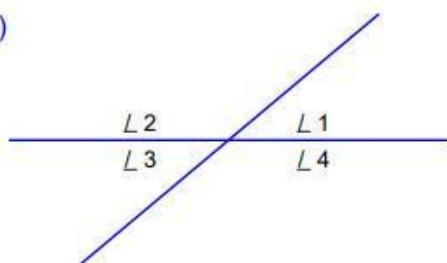
$$\angle 1 = \underline{\quad}$$

$$\angle 2 = \underline{\quad}$$

$$\angle 3 = \underline{109^\circ}$$

$$\angle 4 = \underline{71^\circ}$$

3)



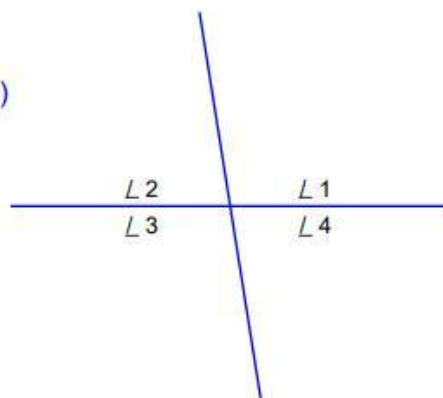
$$\angle 1 = \underline{\quad}$$

$$\angle 2 = \underline{140^\circ}$$

$$\angle 3 = \underline{40^\circ}$$

$$\angle 4 = \underline{\quad}$$

4)



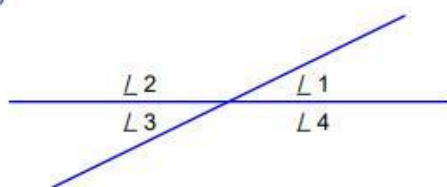
$$\angle 1 = \underline{\quad}$$

$$\angle 2 = \underline{\quad}$$

$$\angle 3 = \underline{99^\circ}$$

$$\angle 4 = \underline{81^\circ}$$

5)



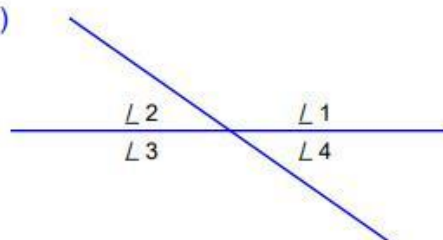
$$\angle 1 = \underline{26^\circ}$$

$$\angle 2 = \underline{154^\circ}$$

$$\angle 3 = \underline{\quad}$$

$$\angle 4 = \underline{\quad}$$

6)



$$\angle 1 = \underline{145^\circ}$$

$$\angle 2 = \underline{\quad}$$

$$\angle 3 = \underline{\quad}$$

$$\angle 4 = \underline{35^\circ}$$