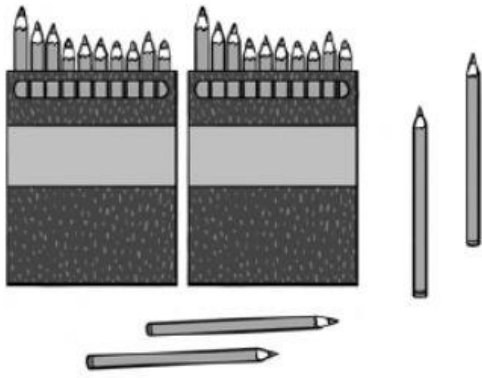


Cuenta, completa y escribe.




decenas y unidades

$$\text{20} + \text{4} = \text{24}$$

veinticuatro


D	U
2	4



decenas y unidades

$$\text{ } + \text{ } = \text{ }$$

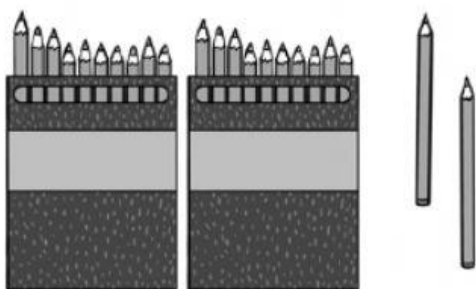
D	U



decenas y unidades

$$\text{ } + \text{ } = \text{ }$$

D	U



decenas y unidades

$$\text{ } + \text{ } = \text{ }$$

D	U