




WORKSHEET -1

I. CHOOSE THE CORRECT ANSWER:

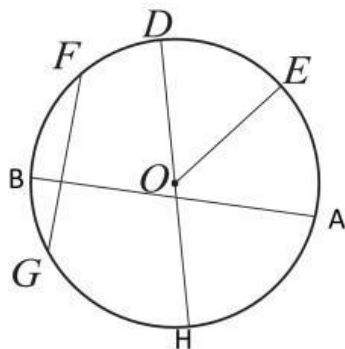
- Which of the following can be used to trace a circle?
a) Book b) Wire c) Coin
- Which among the following can be used to trace a bigger circle?
a) ₹ 5 coin b) ₹ 2 coin c) 50 paise coin
- Which of the following vehicle's tyres has the biggest radius?
a) Motorcycle b) car c) autorickshaw
- A circle is formed by _____ line.
a) Straight b) zig-zag c) curved
- Choose the option which is a circle.
a)  b)  c) 

II. FILL IN THE BLANKS:

(circumference one radius centre diameter)

- The distance from the centre of the circle to the boundary in any direction is called _____ of the circle.
- The longest chord of a circle is called _____.
- The distance around the circle is called _____.
- A circle always has _____ centre(s).
- The diameter of a circle always passes through its _____.

III. JOIN THE PARTS OF THE FOLLOWING CIRCLE:



- | | |
|-------|----------|
| a) O | RADIUS |
| b) OE | CHORD |
| c) DH | CENTRE |
| d) FG | DIAMETER |



