

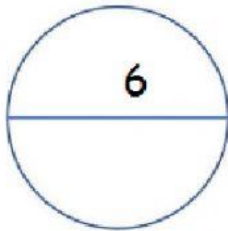
Círculo: radio



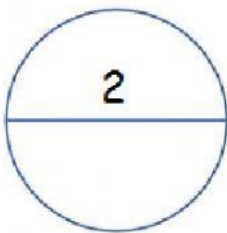
©DESIGNALIKE

INSTRUCCIONES: DADO EL DIÁMETRO DE CADA CÍRCULO INDICA CUÁL ES EL RADIO DE CADA UNO CORRECTAMENTE.

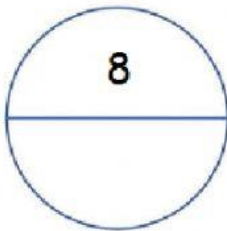
NOTA: EL RADIO ES LA MITAD DEL DIÁMETRO.



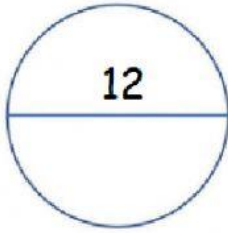
RADIO= _____



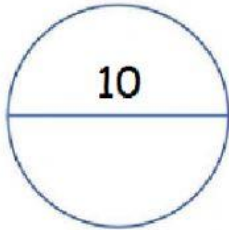
RADIO= _____



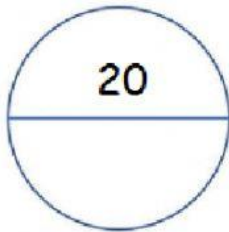
RADIO= _____



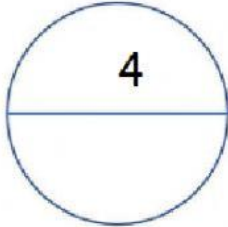
RADIO= _____



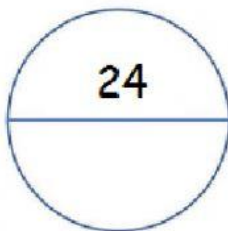
RADIO= _____



RADIO= _____



RADIO= _____



RADIO= _____