

Name: _____


MATHEMATICS

1ST GRADE

TOPIC: COMPARING NUMBERS

I. look at the groups. X the correct sentence.

GROUP 1




GROUP 2




- _____ Group 1 has more.
 X Group 2 has more.
 _____ Group 1 and group 2 are the same

GROUP 1




GROUP 2




- _____ Group 1 has more.
 _____ Group 2 has more.
 _____ Group 1 and group 2 are the same

GROUP 1




GROUP 2




- _____ Group 1 has more.
 _____ Group 2 has more.
 _____ Group 1 and group 2 are the same

GROUP 1




GROUP 2




- _____ Group 1 has more.
 _____ Group 2 has more.
 _____ Group 1 and group 2 are the same





_____ Group 1 has fewer.
 _____ Group 2 has fewer.
 _____ Group 1 and group 2 are the same



_____ Group 1 has fewer.
 _____ Group 2 has fewer.
 _____ Group 1 and group 2 are the same



_____ Group 1 has fewer.
 _____ Group 2 has fewer.
 _____ Group 1 and group 2 are the same



_____ Group 1 has fewer.
 _____ Group 2 has fewer.
 _____ Group 1 and group 2 are the same

II. Circle the SMALLER NUMBER:

12 17

16 11

0 10

18 19

III. Click the word that is the BIGGER NUMBER:

four five

Seven six

One nine

Twelve thirteen

Two zero