













I. Directions: Tick **Attract** if you think the two magnets will attract each other and **Repel** if you think the two magnets will repel each other.

Attract						Repel
<input type="checkbox"/>				<input type="checkbox"/>		
<input type="checkbox"/>				<input type="checkbox"/>		
<input type="checkbox"/>				<input type="checkbox"/>		
<input type="checkbox"/>				<input type="checkbox"/>		

II. Cloze Activity

Fill in the gaps using the words in the box.

Magnets.....exert a force on each other without touching.

A magnetic force can act in one of two ways.

If two magnets pull together, then they.....

If two magnets push away from each other, then they.....


A magnet has two....., north and south.



poles,
charges,
repel, can,
can't, attract.

Look at each pair of magnets. Write whether they attract or repel.

1)



2)



3)



4)



5)




6)



7)



8)



9)

