







Name: _____ Date: _____

Adding Coins

 .43	 .29	 .19
 .53	 .42	 .66

Look at the prices of the items. Find the sum of the following items.

Items	Add up the price
car + spinning top	_____ + _____ = _____
blocks + doll	_____ + _____ = _____
boat + car	_____ + _____ = _____
drum + doll	_____ + _____ = _____
doll + spinning top + boat	_____ + _____ + _____ = _____