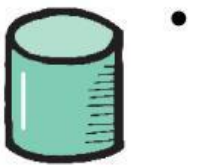
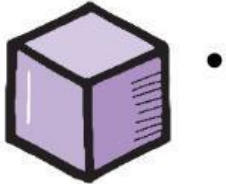


Name: _____

Date: _____

Match the shapes to their names:



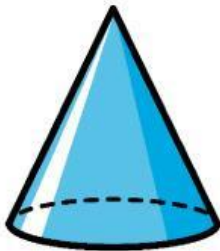
• Cube

• Cylinder

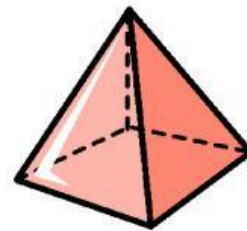
• Pyramid

Select the correct answer:

What shapes make a cone?



What shapes make a pyramid?



What shape is a dice?



What shape is a party hat?

