





TALLY CHART AND FREQUENCY TABLE

Laila is a café owner. She sells burger, pizza, hot dog and fried chicken. The tally chart shows how many of each kind were sold during the weekends. Use the information from the tally chart to answer the questions. Write the frequency of the items sold in the table given. One has been done for you.

Food Items	Tally Marks	Frequency
 Burger		16
 Pizza		
 Fried Chicken		
 Hot Dog		

1. Which food item was sold the least (very less)?

2. How many Burgers and Fried chicken were sold altogether?

3. How many more Pizzas were sold as compared to the Hot Dog?