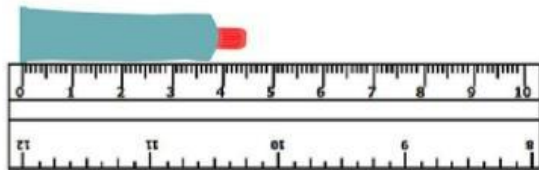


# 4TH GRADE - MATHS

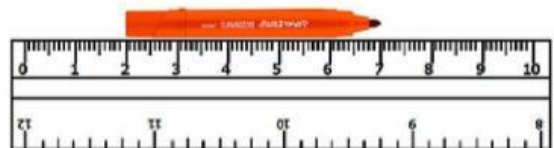
## MEASUREMENT

### INTERACTIVE WORKSHEET 01

I. Measure to the nearest cm or 0.5 cm.



cm



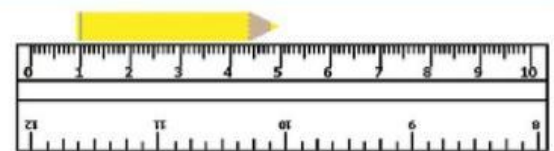
The sketch pen measures

cm.



The screwdriver measures

cm.



The pencil measures

cm.

II. Write the exact lengths of the following line segments.



cm



cm

# GALAXY

# ESCHOOL



LIVEWORKSHEETS