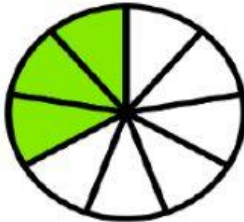


G3 Math Quiz

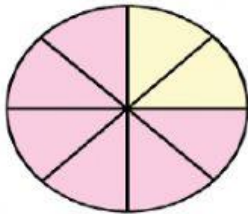
Writing Fractions (10 points)

Direction: Type the correct numbers to show fraction numbers.

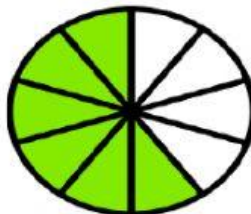
1. —



2. —



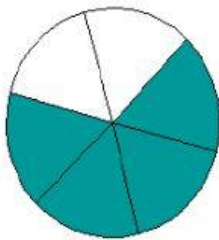
3. —



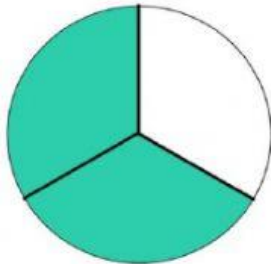
4. —



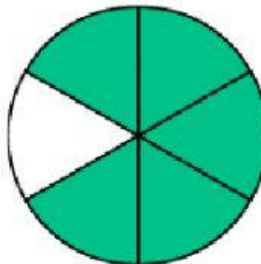
5. —



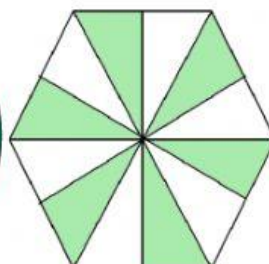
6. —



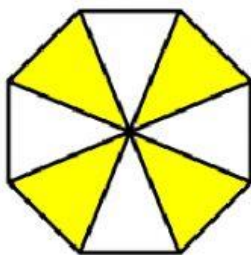
7. —



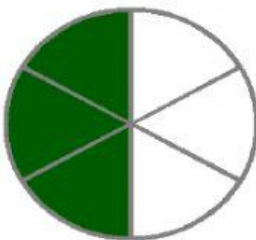
8. —



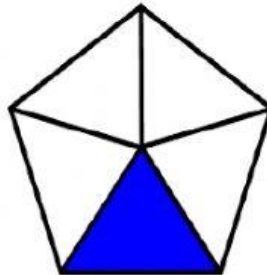
9. —



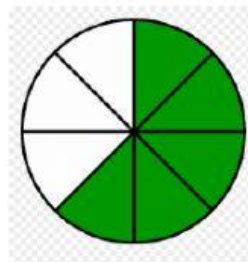
10. —



11. —

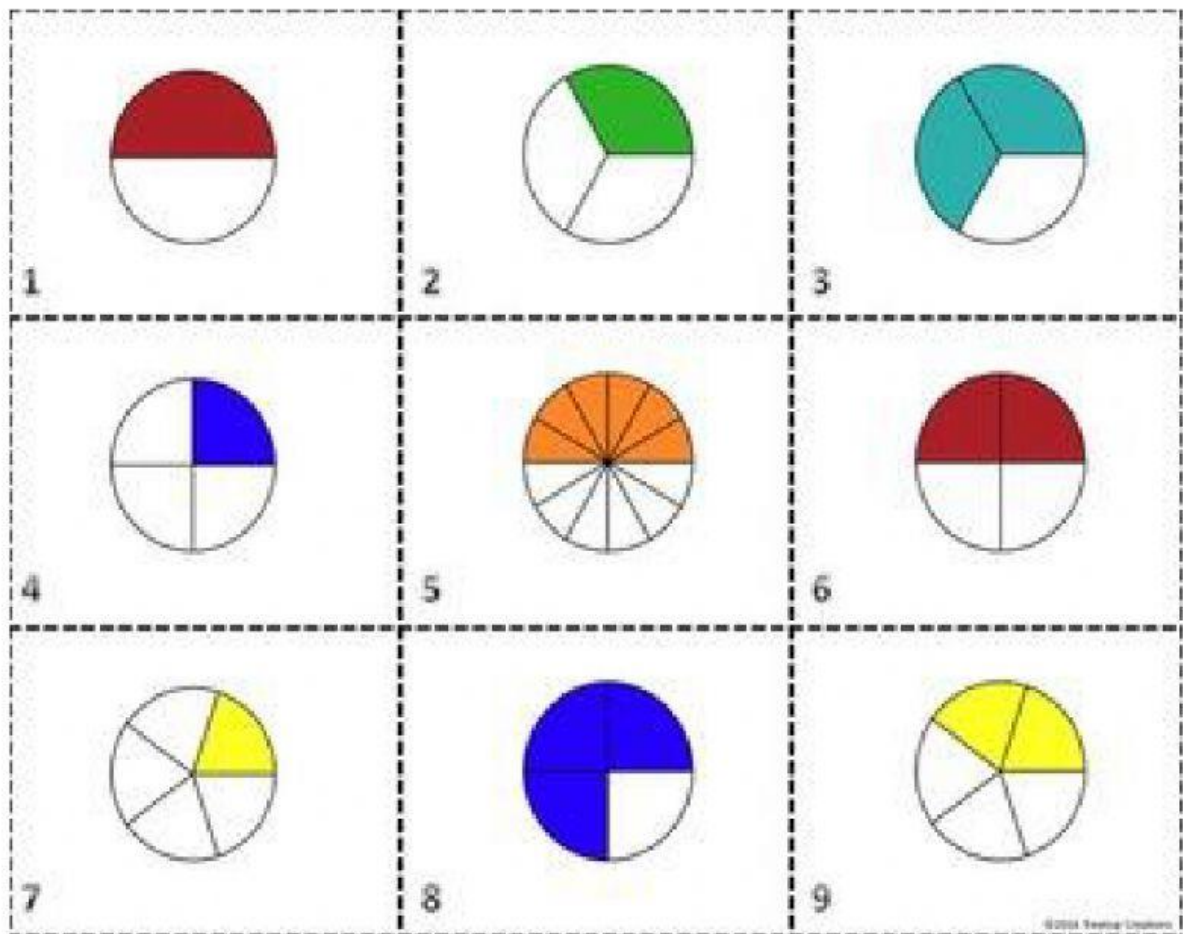


12. —



Word fractions (9 points)

Direction: Type the fractions in words.



Comparing Fractions (9 points)

Direction: Choose  $>$   $=$   $<$  to compare fractions.

- |                   |               |                    |                |                   |               |
|-------------------|---------------|--------------------|----------------|-------------------|---------------|
| 1.) $\frac{1}{2}$ | $\frac{3}{4}$ | 4.) $\frac{5}{10}$ | $\frac{3}{10}$ | 7.) $\frac{2}{4}$ | $\frac{1}{4}$ |
| 2.) $\frac{1}{3}$ | $\frac{2}{3}$ | 5.) $\frac{1}{2}$  | $\frac{2}{4}$  | 8.) $\frac{3}{9}$ | $\frac{7}{9}$ |
| 3.) $\frac{2}{5}$ | $\frac{4}{5}$ | 6.) $\frac{1}{3}$  | $\frac{2}{6}$  | 9.) $\frac{5}{6}$ | $\frac{3}{6}$ |