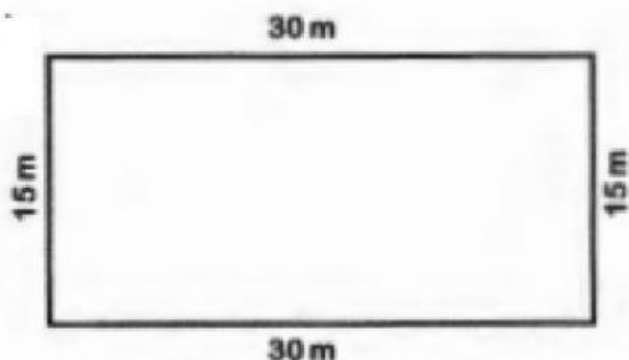


Nome: _____ Turma: _____

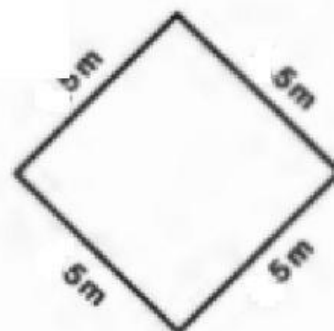


CALCULANDO O PERÍMETRO

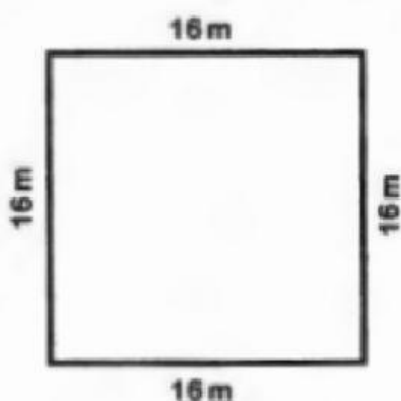
Lembre-se: perímetro é a soma das medidas de todos os lados de um polígono.



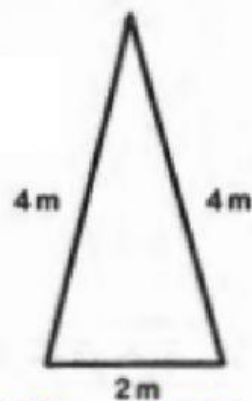
Perímetro: _____ metros



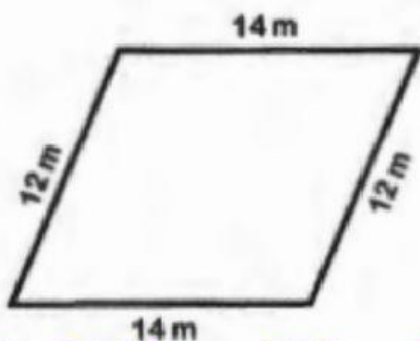
Perímetro: _____ metros



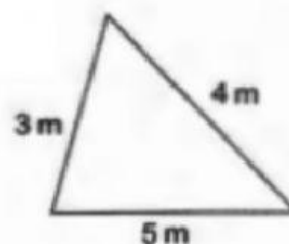
Perímetro: _____ metros



Perímetro: _____ metros


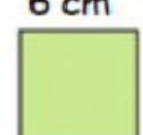
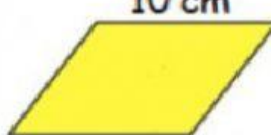
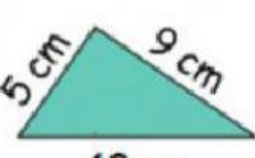
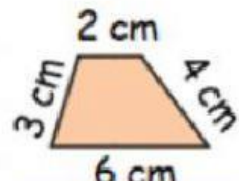
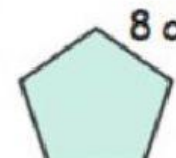


Perímetro: _____ metros



Perímetro: _____ metros

Observe as figuras e calcule o perímetro de cada uma.

 15 cm 7 cm _____ cm	 6 cm _____ cm	 10 cm _____ cm
 5 cm 9 cm 10 cm _____ cm	 2 cm 3 cm 4 cm 6 cm _____ cm	 8 cm _____ cm

A figura abaixo representa a planta de um apartamento. Sabendo que cada quadradinho possui 1 metro de lado, leia as questões e responda corretamente.



Quanto mede o perímetro desse apartamento?

_____ metros

Ainda em relação à planta do apartamento acima, observe os cômodos e calcule o perímetro e a área de cada um.

Cômodos	Perímetro (m)
Sala	_____ metros
Quarto azul	_____ metros
Quarto rosa	_____ metros
Banheiro	_____ metros
Cozinha	_____ metros
Corredor	_____ metros

