

ROLL NO:

NAME:

SECTION:

WORKSHEET# 6

PICTOGRAPH AND 2D-SHAPES

Q1. Count and write.

Square: _____

Rectangle: _____

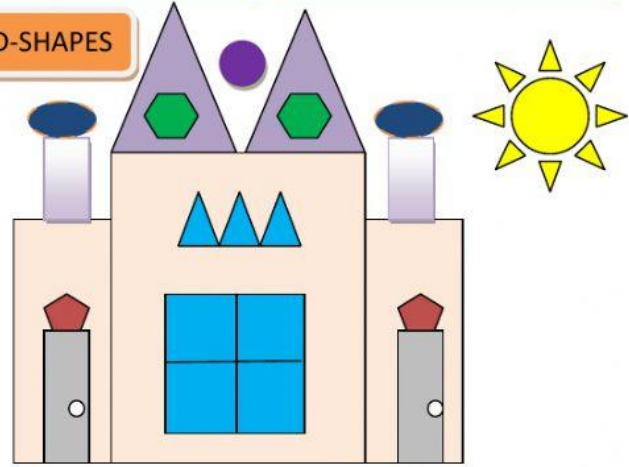
Triangle: _____

Oval: _____

Circle: _____

Pentagon: _____

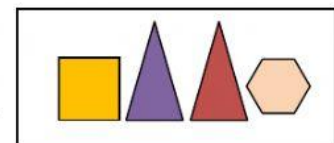
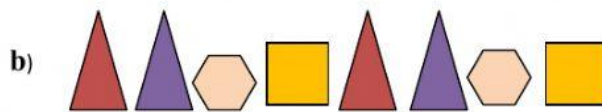
Hexagon: _____



Q2. Complete the table.

Shapes	Names	Number of corners	Number of sides

Q3. Look at the pattern and drag the shape that comes next.



Q4. Look at the pictograph and answer the following questions.

1. How many apple trees are there in the garden? 2. How many peach trees are there in the garden? 3. How many guava trees are there in the garden? 

Number of Trees in a Garden	
One represents	1 Tree
Name	Number of Trees
Apple	
Peach	
Guava	