

SCIENCE

1 Write the name of the senses.



2 Select the correct option.

• What is the main function of the sense of taste?

- a) Identify different flavors
- b) Distinguish different sounds
- c) identify the shape and size of objects

• What is the main function of the sense of hearing?

- a) move, walk, jump
- b) Distinguish different sounds
- c) identify the shape and size of objects

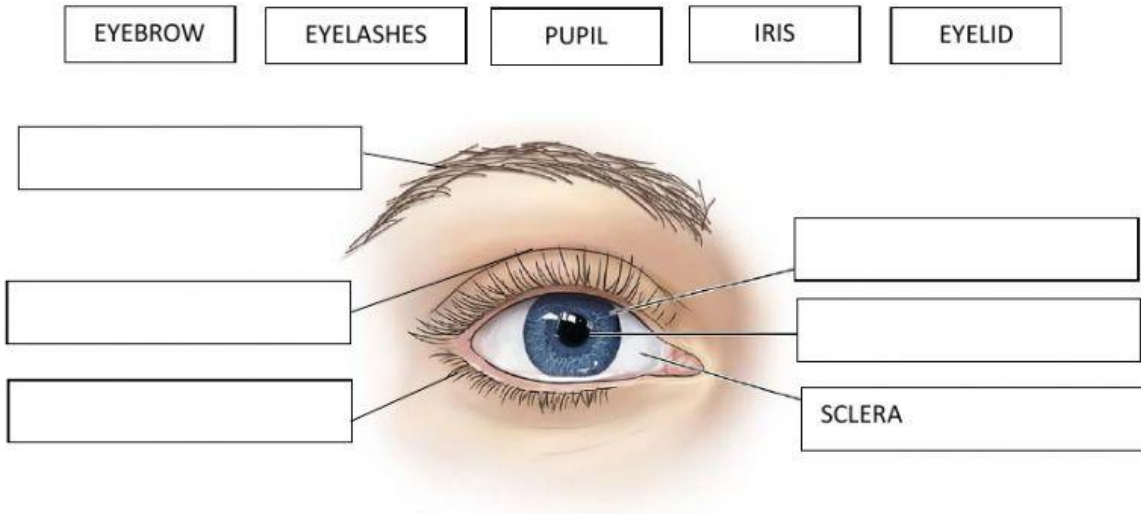
• What is the main function of the sense of sight?

- a) move, walk, jump
- b) Distinguish different sounds
- c) identify the shape and size of objects

• Which of these options is part of the ear?

- a) eardrum
- b) eyelashes
- c) tongue

3 Label the parts of the eye. Drag and drop.



4 Read and write the corresponding flavor (sour -sweet-bitter-salty)

Popcorn - _____
Lemon - _____
Broccoli - _____
Ice cream - _____

5 Match the correct option.

- This part controls voluntary actions. a) cerebellum
- This part controls our coordination and balance. b) cerebrum
- This part controls involuntary actions. c) brain stem
- Which of these is not a part of the nervous system? d) heart

6 Identify the texture of the following objects. Match. Hard – soft – hot – cold.

Rock	Hard
Pillow	Cold
Soup	Soft
Ice cream	Hot

7 Classify the food according to their food group. Drag and drop. Pay attention to the numbers.

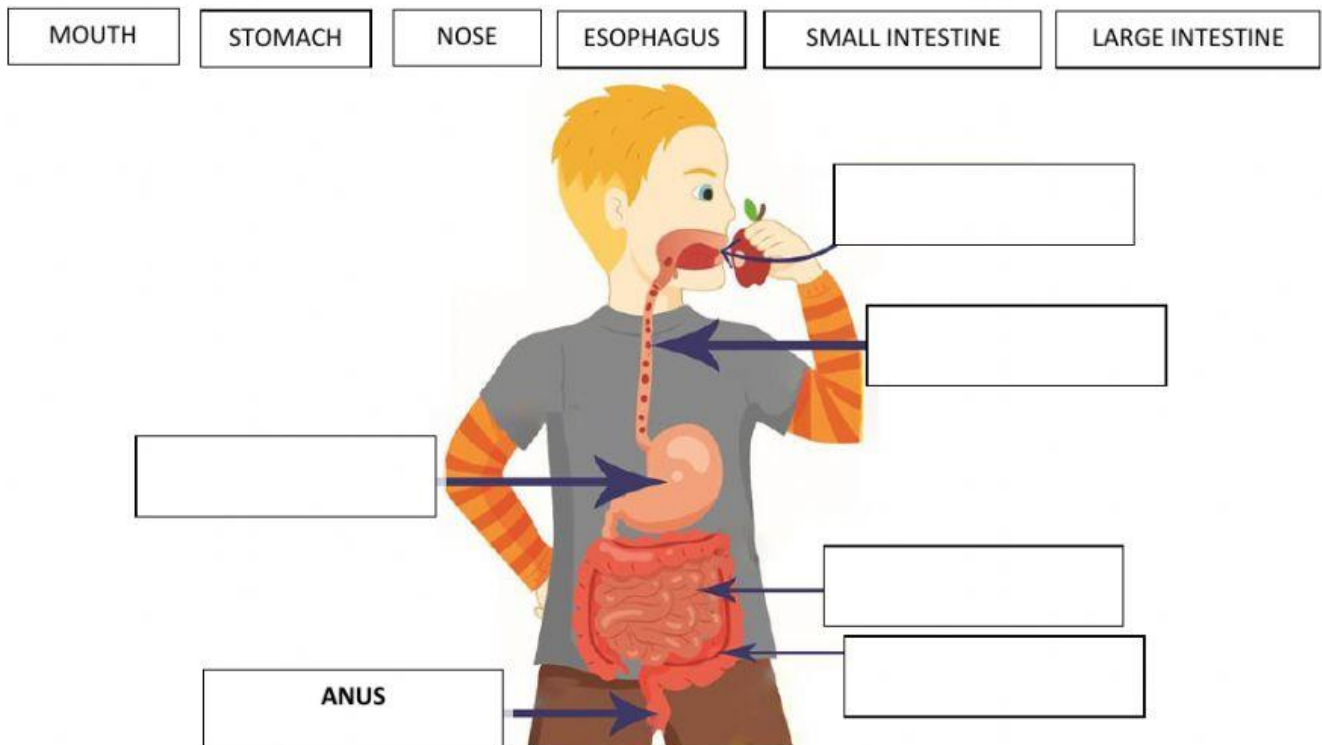
1 fish	1 strawberry	1 oil	1 cheese	1 cereal
2 milk	2 avocado	2 chicken	2 grains	2 banana

Proteins	Fruits	Dary	Carbohydrates	Fats

8 Match to make true sentences.

- | | |
|---|-------------------------------------|
| a) The circulatory system is made up of | blood around the body. |
| b) The heart pumps | two atriums and two ventricles. |
| c) The blood travels to all parts of the body | through the arteries and veins. |
| d) The heart is made up of four sections: | the heart, the arteries, and veins. |

9 Label the picture.



10 Select the correct option.

- Which of these is not sense?

a) smell b) tongue c) hearing

- Which of these is not a part of the digestive system?

b) anus b) trachea c) esophagus

- Which of these is not a part of the circulatory system?

a) atrium b) ventricle c) iris

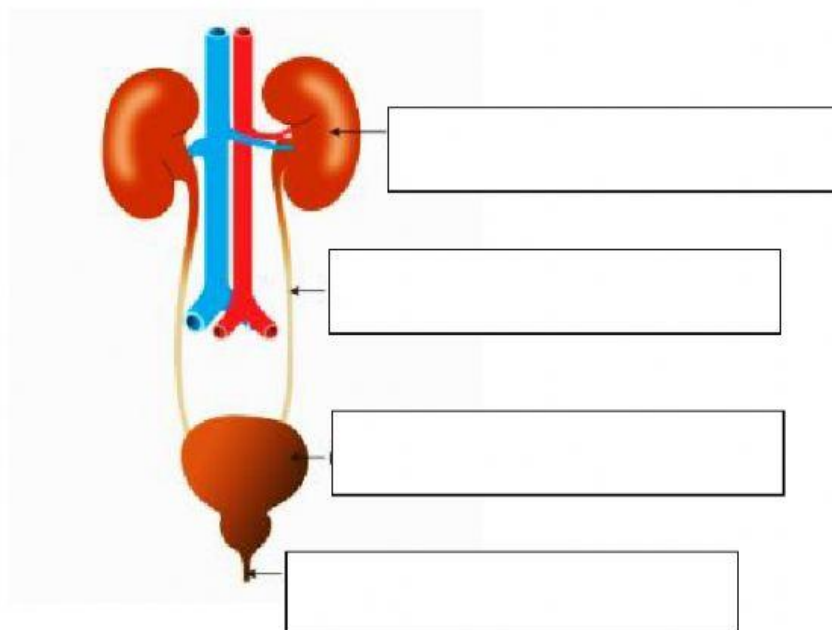
- Which of these is not a fruit?

a) Strawberry b) fish c) banana

- Which of these is a carbohydrate?

a) yogurt b) potatoes c) beans

11 Label the parts of the excretory system. Kidney – bladder – urethra – ureter.



12 Select the correct answer.

- **Why do you have earwax?**

- a) to protect our ears
- b) to identify sounds
- c) to send information to the brain

- **Which is a protein?**

- a) milk
- b) meat
- c) apples

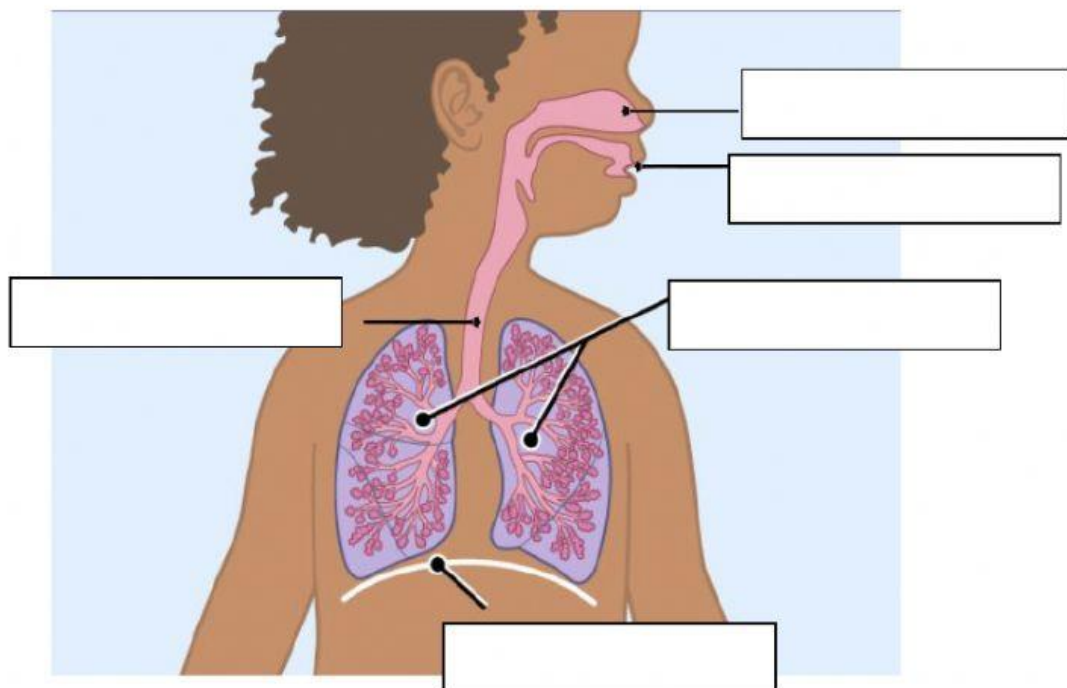
- **What is Earwax?**

- a) salty food
- b) a sticky substance
- c) a colorful flower

- **What is the function of the excretory system?**

- a) Pumps blood around the body
- b) Eliminate waste from our body
- c) Help us to breathe

13 Label the picture. Write the answer. Mouth – lungs – diaphragm – nose - trachea



14 Read and Write True or False.

- a) Our senses of smell and taste help us to identify if something is hot or cold. _____
- b) The heart is made up of 3 sections. One atrium and 2 ventricles. _____
- c) The digestive system pumps blood around the body. _____
- d) When you breathe in, you take in carbon dioxide from the air. _____
- e) Examples of senses are hard, soft, hot and cold. _____

15 Choose the odd one out.

- a- ☐ TONGUE ☐ SIGHT ☐ HEARING ☐ TASTE
- b- ☐ RETINA ☐ MIDDLE EAR ☐ EYEBROW ☐ PUPIL
- c- ☐ NOSE ☐ SKIN ☐ NOSTRILS ☐ OLFACTORY NERVE
- d- ☐ HARD ☐ BITTER ☐ SOUR ☐ SWEET

16 Find the following 8 words.

CIRCULATORY SYSTEM

- HEART
- ARTERIES
- VEINS

RESPIRATORY SYSTEM

- MOUTH
- NOSE
- LUNGS
- TRACHEA
- DIAPHRAGM

