

TECHNICAL DRAWING

Name these instruments



Set square



Ruler

Compass

Pencil

Lines


Join the name with the drawing



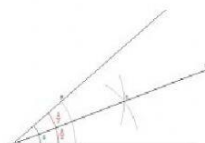
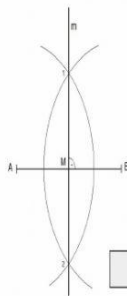
Horizontal parallel lines

Vertical parallel lines

45 degrees parallel lines



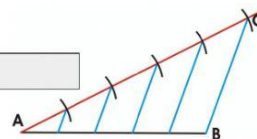
Name these geometric sketches





Bisector of a segment

Bisector of an angle

Division of a segment in equal sections



Match the forms with its name



Polygon

Square

Circle

Triangle