

1st Term

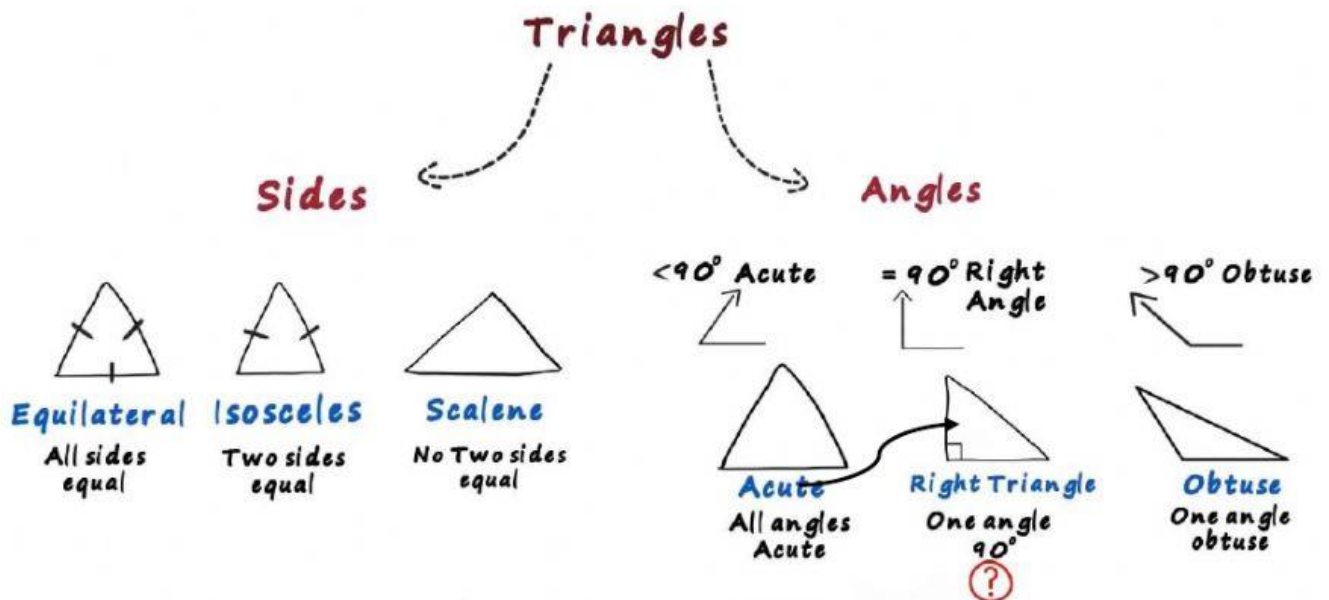
Maths

Click to watch the video again



Types of triangles

There are different types of triangles and they can be classified on their sides and their angles

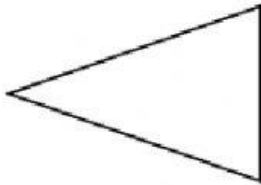


Can we have to right angles in a triangle?

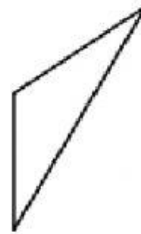
Acute Triangle	Equilateral Triangle
All angles are less than 90°	3 equal sides. 3 equal angles.
Obtuse Triangle	Isosceles Triangle
One angle is greater than 90°	2 equal sides. 2 equal angles
Right Triangle	Scalene Triangle
One angle is 90°	No equal sides. No equal angles

According to what you saw on the video. Determine if each triangle is acute (A), obtuse (O) or right (R) and if it's an equilateral (E), isosceles (I) or scalene (S)

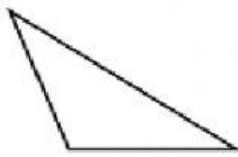
1)



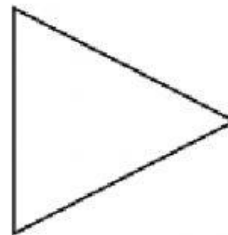
2)



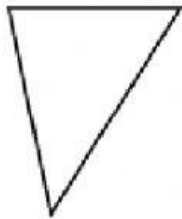
3)



4)



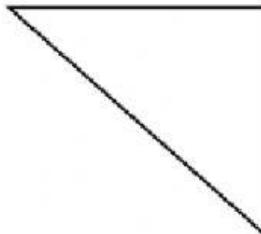
5)



6)



7)



8)



Answers

1. _____

2. _____

3. _____

4. _____

5. _____

6. _____

7. _____

8. _____