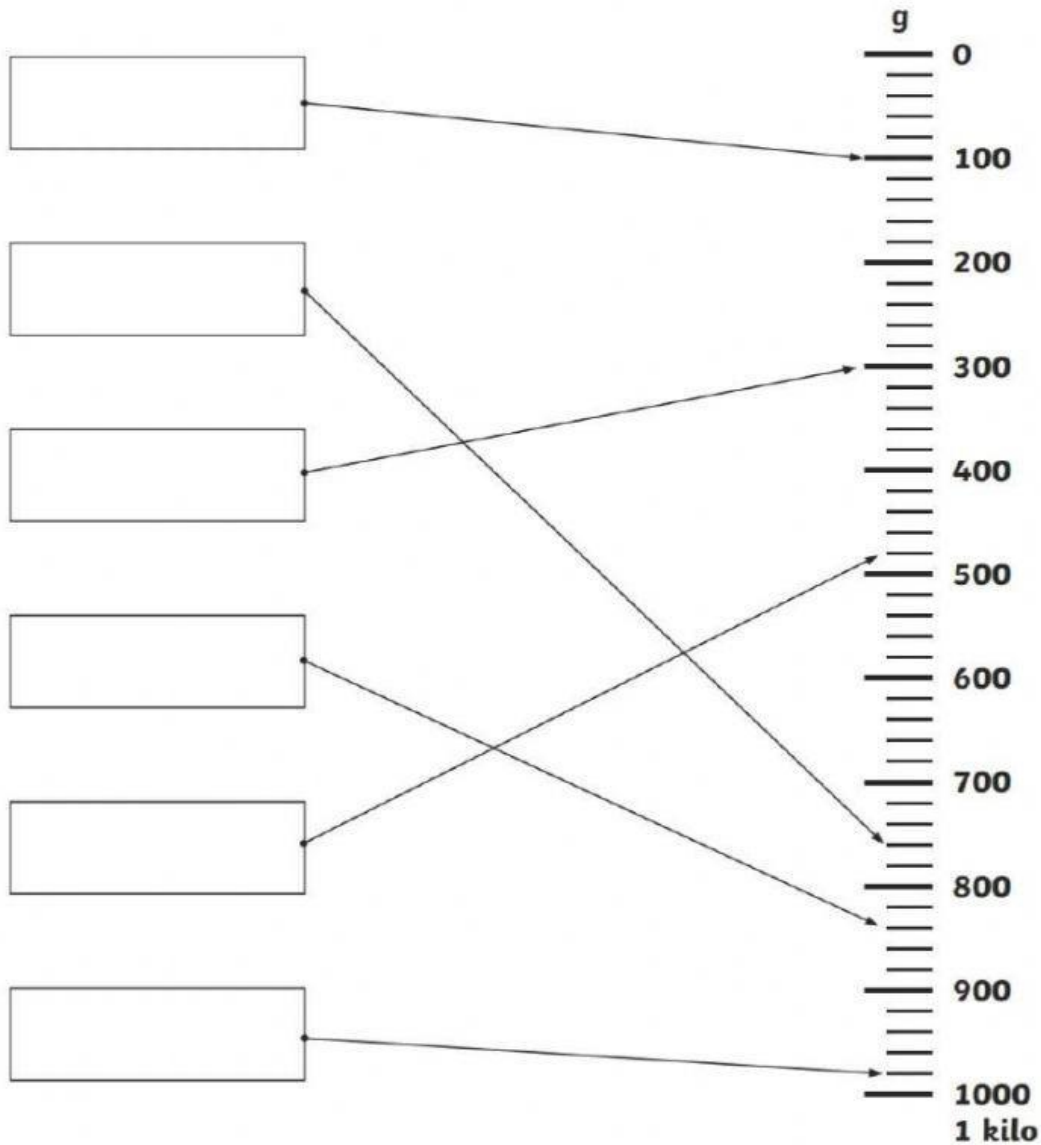


Reading Scales

The scale shows 1 Kilogram, each large division is 100 grams and each small division is 20 grams.

Write in the reading for each of the arrows.



Choose an appropriate unit of mass for the following statements.

This person is weighing themselves.
Which unit is best used for measuring a person's mass?



- a. Grams
- b. Kilograms

Which unit is best used for showing the mass of a sack of potatoes?



- a. Grams
- b. Kilograms

A cupcake is light enough that a young girl can hold it in her hand.
Which unit of measurement would we use to show its mass?



- a. Grams
- b. Kilograms

Which unit of measurement is used to weigh this apple?



- a. Grams
- b. Kilograms

This box is quite heavy. It takes all this man's effort to lift it.
Which unit of measurement is best used to display its mass?



- a. Grams
- b. Kilograms

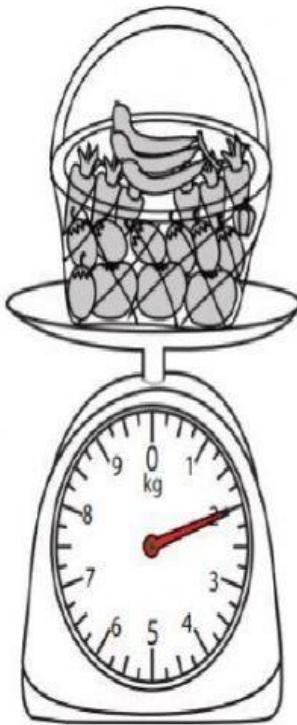
Which unit of measurement would best show the mass of an egg?



- a. Grams
- b. Kilograms


Read the masses on the scale and write on the spaces given.

1)




_____ kg

2)



_____ g

3)



_____ kg