


Name:

Mathematics

Topic: Introduction of closed shapes, their sides and angles

Q- Answer the following in one word in the blank space provided.



Name:

Number of sides:


Number of Angles:



Name:

Number of sides:

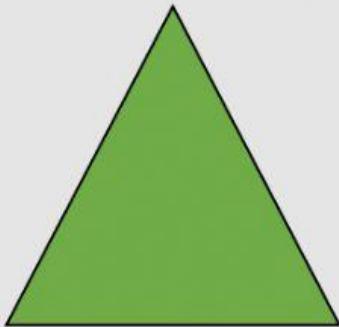
Number of Angles:



Name:

Number of sides:

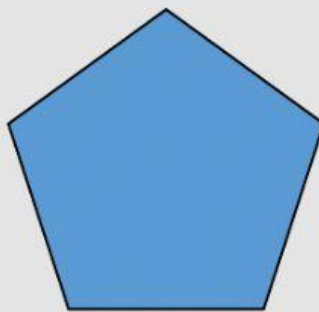
Number of Angles:



Name:

Number of sides:

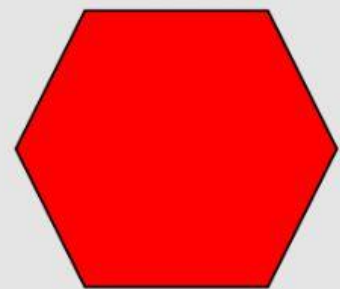
Number of Angles:



Name:

Number of sides:

Number of Angles:



Name:

Number of sides:

Number of Angles: