

SUMAS. Algoritmo en Árbol.

Ejercicio para desarrollar el cálculo mental

$$26 + 26$$

$$40 + 10 + 2$$

$$52$$

$$33 + 33$$

$$26 + 26$$

$$41 + 41$$

$$45 + 45$$

$$16 + 16$$

$$53 + 27$$

$$41 + 47$$

$$23 + 23$$

$$36 + 29$$


$$48 + 35$$

$$36 + 36$$

SUMAS. Algoritmo en Árbol.

Ejercicio para desarrollar el cálculo mental

$$28 + 28$$





$$40 + 10 + 6$$




$$56$$


$$55 + 55$$





$$46 + 46$$




$$24 + 24$$




$$12 + 12$$





$$19 + 19$$




$$18 + 18$$




$$15 + 15$$




$$53 + 53$$



$$47 + 44$$



$$65 + 27$$



$$62 + 29$$

