



SUMAS


1. Resuelve los siguientes ejercicios y anota la respuesta correcta.



A visual addition problem featuring deer. The first box contains 7 deer arranged in two rows (4 in the top row, 3 in the bottom row). This is followed by a red plus sign, then a second box containing 2 deer arranged vertically. This is followed by a red equals sign and a large empty green square box for the answer.



A visual addition problem featuring monkeys. The first box contains 8 monkeys arranged in two rows of 4. This is followed by a red plus sign, then a second box containing 4 monkeys arranged in two rows of 2. This is followed by a red equals sign and a large empty purple square box for the answer.



A visual addition problem featuring lions. The first box contains 5 lions arranged in two rows (3 in the top row, 2 in the bottom row). This is followed by a red plus sign, then a second box containing 2 lions arranged vertically. This is followed by a red equals sign and a large empty orange square box for the answer.