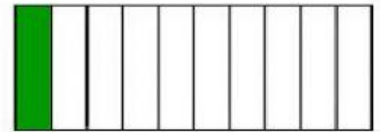
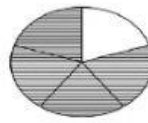
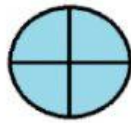
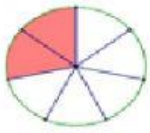


**Interactive Worksheet: Week 14-Day 1 / Self-Learning Program**

**Exercise:**

The colored part of each figure represents a fraction.

Choose the word-form written of each: **Drag and Drop**



Four-quarters

One-tenth

Four-fifths

Two-sevenths