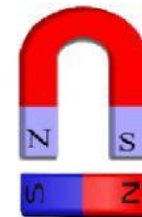
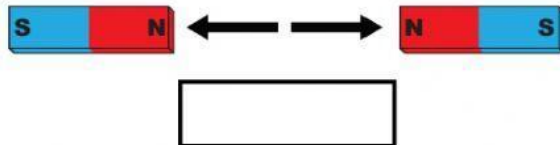
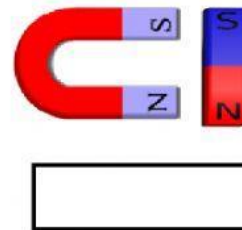
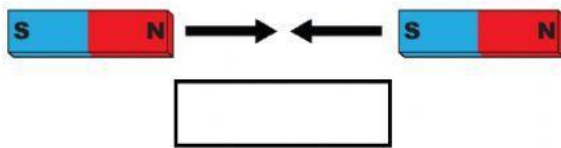
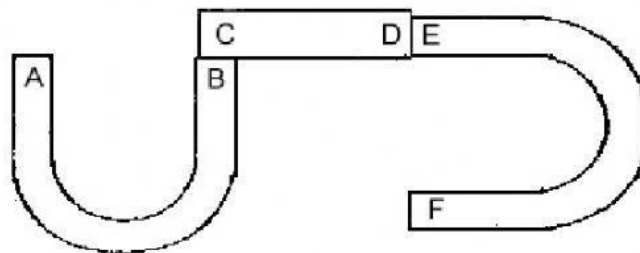


The law of pole

A. Look at these pictures below and choose the correct answer.



B. Look at this picture below.



➤ If "A" is the "North-pole" of the magnet, what pole will B, C, D, E and F be? North Pole or South Pole?

A = North-pole	C =	E =
B =	D =	F =

➤ If "A" is the "South-pole" of the magnet, what pole will B, C, D, E and F be? North-pole or South-pole?

A = South-pole	C =	E =
B =	D =	F =