





Tell the time to the minute

1 Complete the sentences.

- a) When the minute hand is pointing to 4, it is minutes past the hour.
 b) When the minute hand is pointing to 5, it is minutes past the hour.
 c) When the minute hand is pointing to 7, it is minutes past the hour.

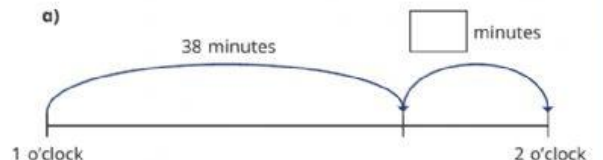
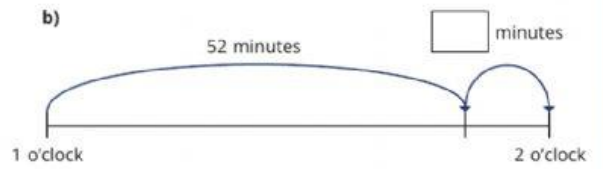
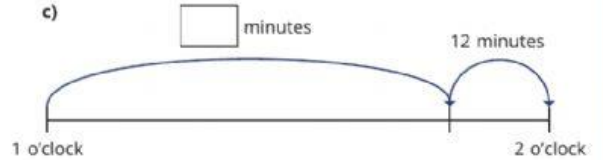
2 What time is shown on each clock?

- a) 
 minutes past 2
 c) 
 minutes past
 b) 
 minutes past 2
 d) 

3 Complete the additions.

- a) $51 + \square = 60$ d) $43 + \square = 60$
 b) $31 + \square = 60$ e) $48 + \square = 60$
 c) $39 + \square = 60$ f) $\square + 11 = 60$

4 Write the missing minutes on the number lines.

- a) 
 b) 
 c) 

5 Complete the times to make the statements correct.

- a) 51 minutes past 1 = minutes to 2
- b) 51 minutes past 7 = minutes to
- c) 34 minutes past = minutes to 8
- d) 44 minutes past 12 = minutes to
- e) minutes past = 1 minute to 10

6 Complete the times shown on each clock.

a)



minutes past 2
 minutes to 3

b)



minutes past
 minutes to

7

The time is
55 minutes past 7, so it is
45 minutes to 8



- a) What mistake has Rosie made?
- b) What is the correct time?

8 Draw the hands on the clocks to show the times.

a)



28 minutes to 6

b)



6 minutes to 12

9 Tommy, Whitney and Alex are telling the time.



Tommy

It is 4 minutes
to 5



Alex

It is 14 minutes
to 5



Whitney

It is 24 minutes
to 5

Who is correct?