
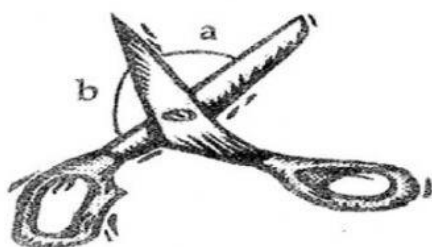


Geometry

Past BJC Paper 1 question

1. For each of the angles marked in the pictures below, write down the name of the angle

obtuse angle, right angle, acute angle, reflex angle



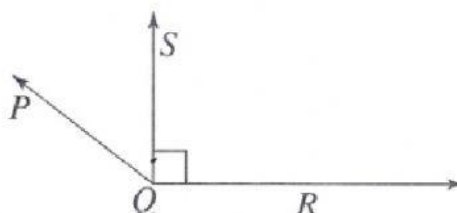
Answer a \_\_\_\_\_ [1]

Answer b \_\_\_\_\_ [1]

Answer c \_\_\_\_\_ [1]

Answer d \_\_\_\_\_ [1]

2.



Use the figure above to answer the questions below.

(a) \_\_\_\_\_ is an acute angle.

(b) \_\_\_\_\_ is an obtuse angle.

(c) \_\_\_\_\_ is a line perpendicular to another line