


Name: _____



1. It is _____.



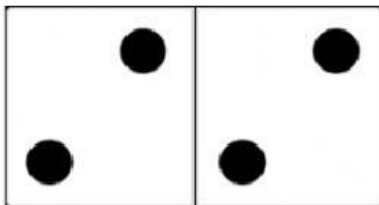
- a. half past 12
- b. 5 o'clock
- c. 1 o'clock
- d. 4 o'clock



2. It is about _____.

- a. half past 2
- b. half past 8
- c. 7 o'clock
- d. 8 o'clock

3. Select all the pictures with the double facts.



4. What takes a **longer time** than combing your hair?

5. What do you like about Mathematics?

6. How many tens and ones are in the number 40?

a. 4 tens 0 ones

b. 0 tens 4 ones

c. 40 tens 0 ones

d. 4 tens 1 ones

7. Click all the things that you like.

pizza chicken nuggets birthday parties mac and cheese