



Task 1: Divide the given pictures into equal groups.


1) How many groups of 3? ____



2) How many groups of 4? ____




3) How many groups of 2? ____



4) How many groups of 5? ____



5) How many groups of 10? ____



6) How many groups of 3? ____




Task 2: Do as directed.

Use the pictures to help you to work out the division problems.

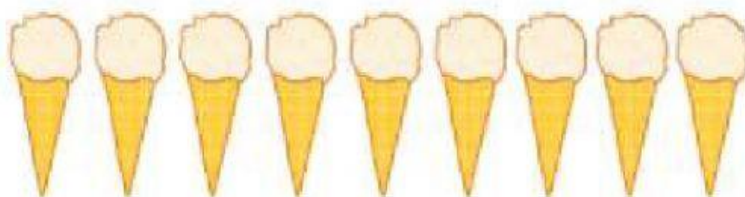
1) $8 \div 2 = \underline{\quad}$



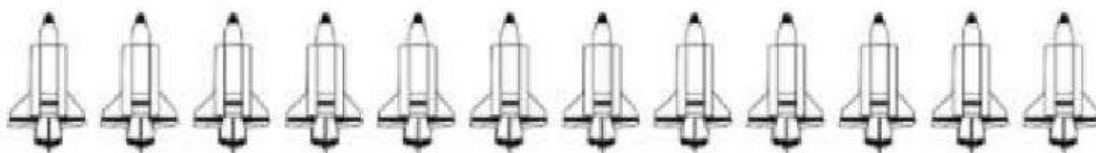
2) $10 \div 5 = \underline{\quad}$



3) $9 \div 3 = \underline{\quad}$



4) $12 \div 6 = \underline{\quad}$



5) $5 \div 5 = \underline{\quad}$



6) $15 \div 3 = \underline{\quad}$

