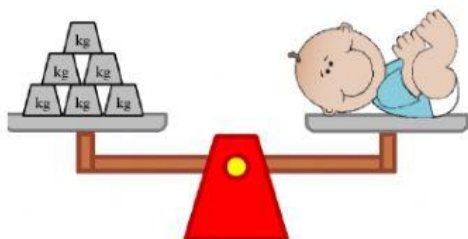
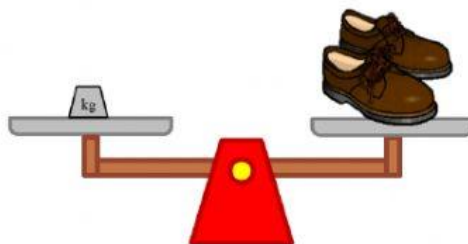


## Measurement – Weight

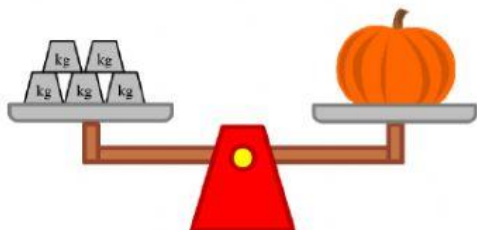
**Count at the weights on the weighing scale and write correct answer.**



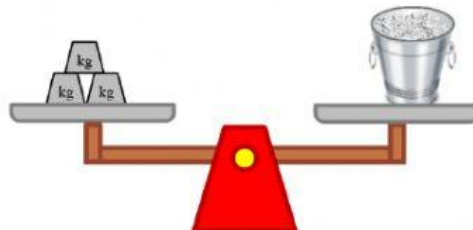
The baby weighs \_\_\_\_ kg.



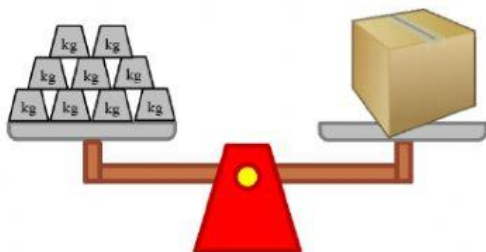
The pair of shoes weighs \_\_\_\_ kg.



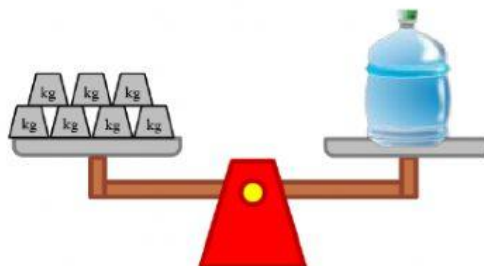
The pumpkin weighs \_\_\_\_ kg.



The ice bucket weighs \_\_\_\_ kg.



The box weighs \_\_\_\_ kg.



The water bottle weighs \_\_\_\_ kg.

Which object is the heaviest? \_\_\_\_\_

Which object is the lightest? \_\_\_\_\_